

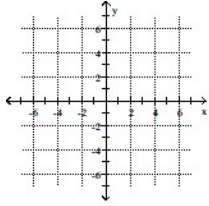
Exam

Name _____

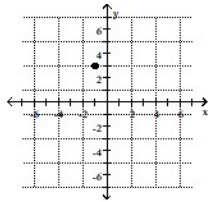
MULTIPLE CHOICE. Choose the one alternative that best completes the statement or answers the question.

Plot the given point in a rectangular coordinate system.

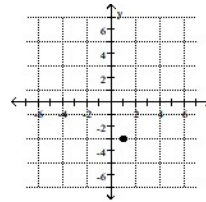
1) (1, 3)



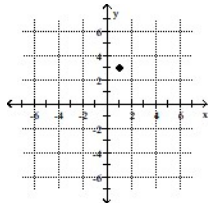
A)



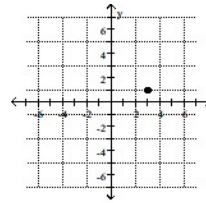
B)



C)

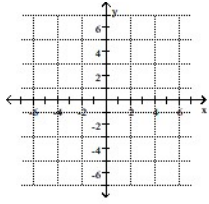


D)

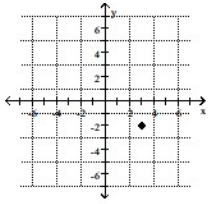


Answer: C

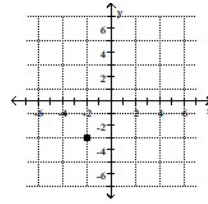
2) $(-2, 3)$



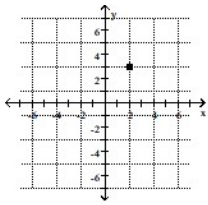
A)



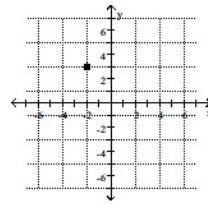
B)



C)

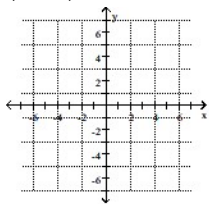


D)

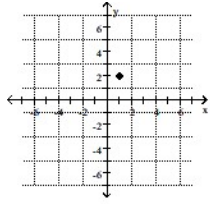


Answer: D

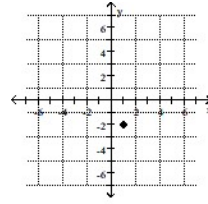
3) $(1, -2)$



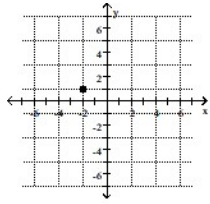
A)



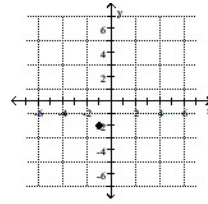
B)



C)

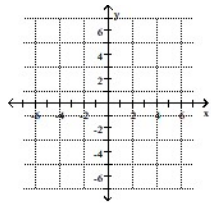


D)

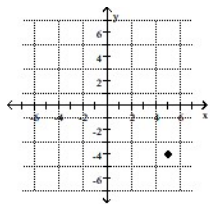


Answer: B

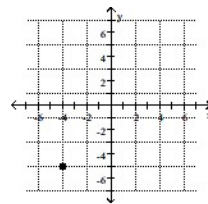
4) (-5, -4)



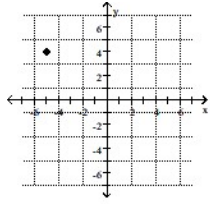
A)



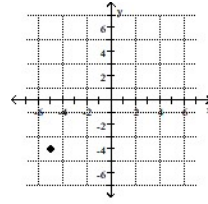
B)



C)

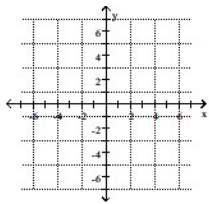


D)

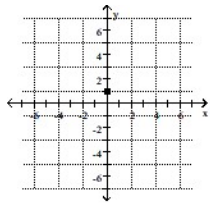


Answer: D

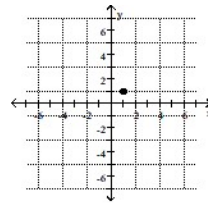
5) (0, 1)



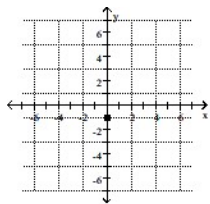
A)



B)



C)



D)

