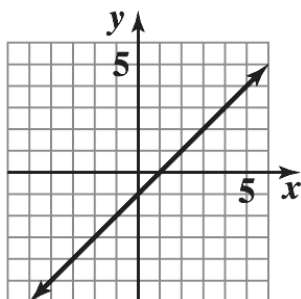


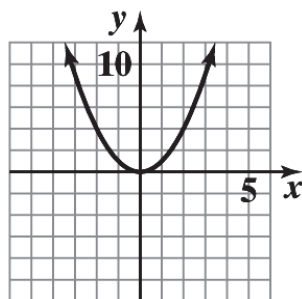
2 FUNCTIONS AND GRAPHS

EXERCISE 2-1

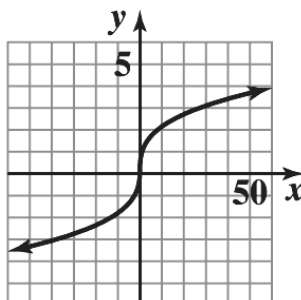
2.



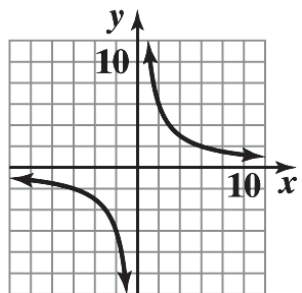
4.



6.

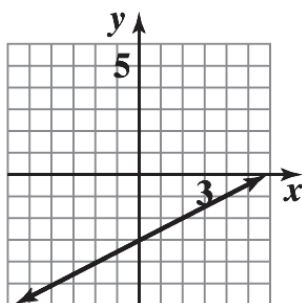


8.

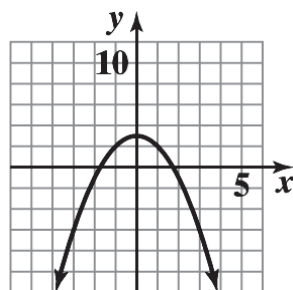


10. The table specifies a function, since for each domain value there corresponds one and only one range value.
12. The table does not specify a function, since more than one range value corresponds to a given domain value.
(Range values 1, 2 correspond to domain value 9.)
14. This is a function.
16. The graph specifies a function; each vertical line in the plane intersects the graph in at most one point.
18. The graph does not specify a function. There are vertical lines which intersect the graph in more than one point. For example, the y -axis intersects the graph in two points.
20. The graph does not specify a function.
22. $y = 10 - 3x$ is linear.
24. $x^2 - y = 8$ is neither linear nor constant.
26. $y = \frac{2+x}{3} + \frac{2-x}{3} = \frac{2}{3} + \frac{x}{3} + \frac{2}{3} - \frac{x}{3}$
 $= \frac{4}{3}$ which is constant.
28. $9x - 2y + 6 = 0$ is linear.

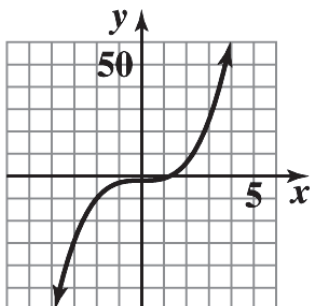
30.



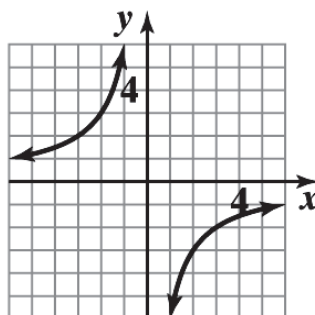
32.



34.



36.

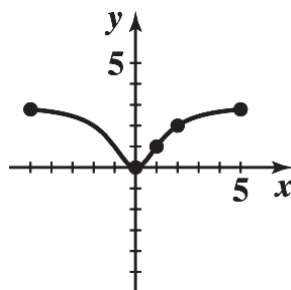


38. $f(x) = \frac{3x^2}{x^2 + 2}$. Since the denominator is bigger than 1, we note that the values of f are between 0 and 3.

Furthermore, the function f has the property that $f(-x) = f(x)$. So, adding points $x = 3$, $x = 4$, $x = 5$, we have:

x	-5	-4	-3	-2	-1	0	1	2	3	4	5
$F(x)$	2.78	2.67	2.45	2	1	0	1	2	2.45	2.67	2.78

The sketch is:



40. $y = f(4) = 0$

44. $f(x) = 3$, $x < 0$ at $x = -4$, -2

48. All real numbers

52. $x > -5$

42. $y = f(-2) = 3$

46. $f(x) = 4$ at $x = 5$

50. All real numbers except $x = 2$

54. Given $6x - 7y = 21$. Solving for y we have: $-7y = 21 - 6x$ and $y = \frac{6}{7}x - 3$.

This equation specifies a function. The domain is R , the set of real numbers.

56. Given $x(x + y) = 4$. Solving for y we have: $xy + x^2 = 4$ and $y = \frac{4 - x^2}{x}$.

This equation specifies a function. The domain is all real numbers except 0.

58. Given $x^2 + y^2 = 9$. Solving for y we have: $y^2 = 9 - x^2$ and $y = \pm\sqrt{9 - x^2}$.

This equation does not define y as a function of x . For example, when $x = 0$, $y = \pm 3$.

60. Given $\sqrt{x} - y^3 = 0$. Solving for y we have: $y^3 = \sqrt{x}$ and $y = x^{1/6}$.

This equation specifies a function. The domain is all nonnegative real numbers, i.e., $x \geq 0$.

62. $f(-5) = (-5)^2 - 4 = 25 - 4 = 21$

64. $f(x - 2) = (x - 2)^2 - 4 = x^2 - 4x + 4 - 4 = x^2 - 4x$

66. $f(10x) = (10x)^2 - 4 = 100x^2 - 4$

68. $f(\sqrt{x}) = (\sqrt{x})^2 - 4 = x - 4$

70. $f(-3) + f(h) = (-3)^2 - 4 + h^2 - 4 = 5 + h^2 - 4 = h^2 + 1$

72. $f(-3 + h) = (-3 + h)^2 - 4 = 9 - 6h + h^2 - 4 = 5 - 6h + h^2$

74. $f(-3 + h) - f(-3) = [(-3 + h)^2 - 4] - [(-3)^2 - 4] = (9 - 6h + h^2 - 4) - (9 - 4) = -6h + h^2$

76. (A) $f(x+h) = -3(x+h) + 9 = -3x - 3h + 9$
 (B) $f(x+h) - f(x) = (-3x - 3h + 9) - (-3x + 9) = -3h$
 (C) $\frac{f(x+h) - f(x)}{h} = \frac{-3h}{h} = -3$
78. (A) $f(x+h) = 3(x+h)^2 + 5(x+h) - 8$
 $= 3(x^2 + 2xh + h^2) + 5x + 5h - 8$
 $= 3x^2 + 6xh + 3h^2 + 5x + 5h - 8$
 (B) $f(x+h) - f(x) = (3x^2 + 6xh + 3h^2 + 5x + 5h - 8) - (3x^2 + 5x - 8)$
 $= 6xh + 3h^2 + 5h$
 (C) $\frac{f(x+h) - f(x)}{h} = \frac{6xh + 3h^2 + 5h}{h} = 6x + 3h + 5$
80. (A) $f(x+h) = x^2 + 2xh + h^2 + 40x + 40h$
 (B) $f(x+h) - f(x) = 2xh + h^2 + 40h$
 (C) $\frac{f(x+h) - f(x)}{h} = 2x + h + 40$

82. Given $A = \ell w = 81$.

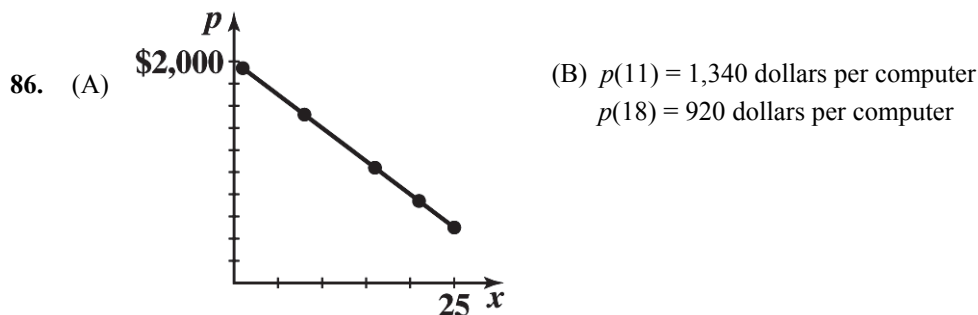
Thus, $w = \frac{81}{\ell}$. Now $P = 2\ell + 2w = 2\ell + 2\left(\frac{81}{\ell}\right) = 2\ell + \frac{162}{\ell}$.

The domain is $\ell > 0$.

84. Given $P = 2\ell + 2w = 160$ or $\ell + w = 80$ and $\ell = 80 - w$.

Now $A = \ell w = (80 - w)w$ and $A = 80w - w^2$.

The domain is $0 < w < 80$. [Note: $w < 80$ since $w \geq 80$ implies $\ell \leq 0$.]

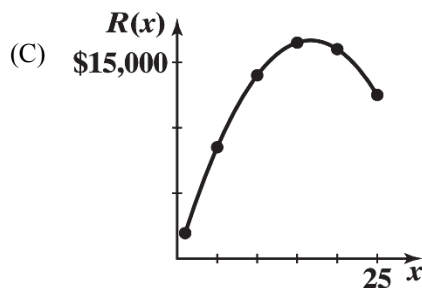


88. (A) $R(x) = xp(x)$
 $= x(2,000 - 60x)$ thousands of dollars

Domain: $1 \leq x \leq 25$

(B) Table 11 Revenue

x (thousands)	$R(x)$ (thousands)
1	\$1,940
5	8,500
10	14,000
15	16,500
20	16,000
25	12,500



90. (A) $P(x) = R(x) - C(x)$
 $= x(2,000 - 60x) - (4,000 + 500x)$ thousand dollars
 $= 1,500x - 60x^2 - 4,000$

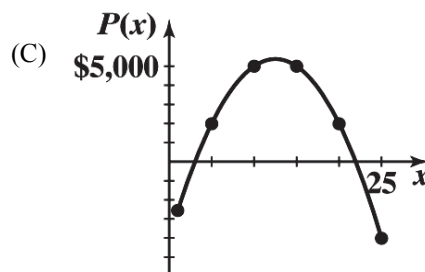
Domain: $1 \leq x \leq 25$

(B) Table 13 Profit

x (thousands)	$P(x)$ (thousands)
1	-\$2,560
5	2,000
10	5,000
15	5,000
20	2,000
25	-4,000

92. (A) 1.2 inches

(B) Evaluate the volume function for $x = 1.21, 1.22, \dots$, and choose the value of x whose volume is closest to 65.



(C) $x = 1.23$ to two decimal places

X	Y1
1.2	64.512
1.21	64.682
1.22	64.847
1.23	65.007
1.24	65.162
1.25	65.313
1.26	65.458

X=1.23

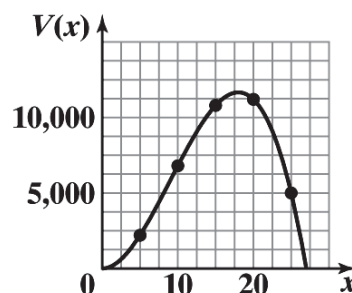
94. (A) $V(x) = x^2(108 - 4x)$

(B) $0 < x < 27$

(C) Table 16 Volume

x	$V(x)$
5	2,200
10	6,800
15	10,800
20	11,200
25	5,000

(D)



96. (A) Given $5v - 2s = 1.4$. Solving for v , we have:

$$v = 0.4s + 0.28.$$

If $s = 0.51$, then $v = 0.4(0.51) + 0.28 = 0.484$ or 48.4%.

(B) Solving the equation for s , we have:

$$s = 2.5v - 0.7.$$

If $v = 0.51$, then $s = 2.5(0.51) - 0.7 = 0.575$ or 57.5%.

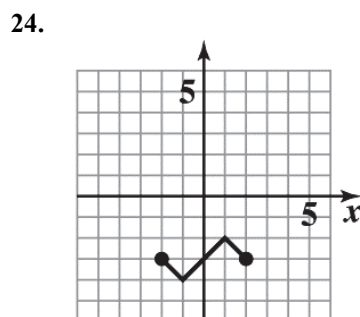
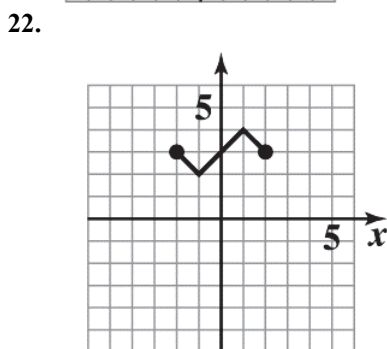
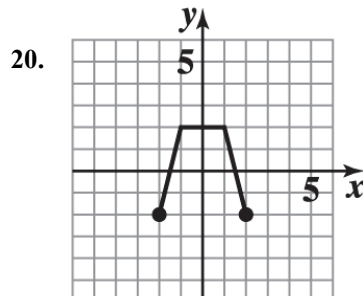
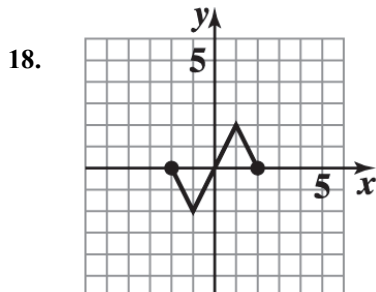
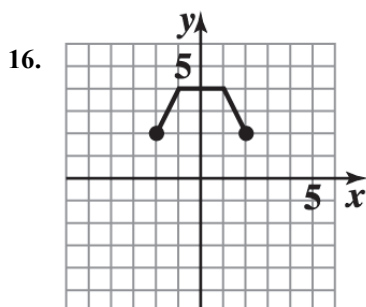
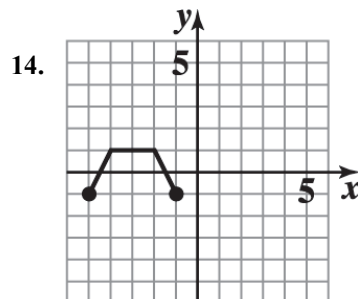
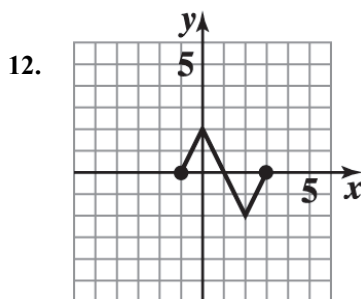
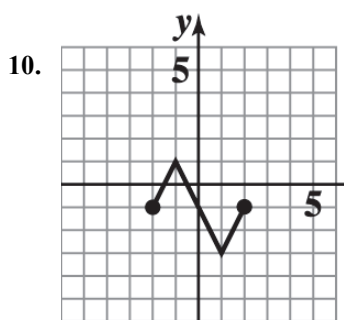
EXERCISE 2-2

2. $f(x) = -4x + 12$ Domain: all real numbers; range: all real numbers.

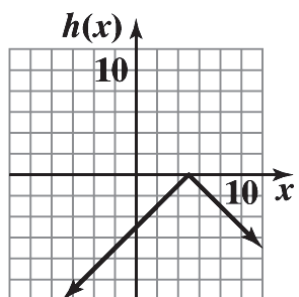
4. $f(x) = 3 + \sqrt{x}$ Domain: $[0, \infty)$; range: $[3, \infty)$.

6. $f(x) = -5|x| + 2$ Domain: all real numbers; range: $(-\infty, 2]$.

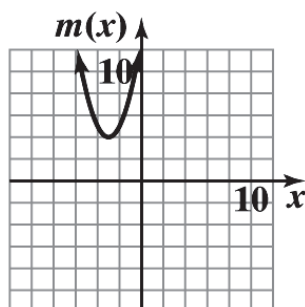
8. $f(x) = 20 - 10\sqrt[3]{x}$ Domain: all real numbers; range: all real numbers.



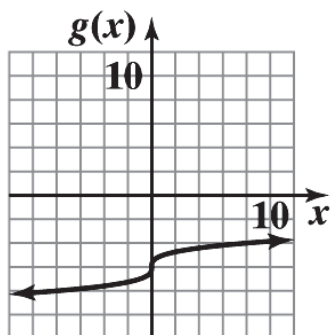
26. The graph of $h(x) = -|x - 5|$ is the graph of $y = |x|$ reflected in the x axis and shifted 5 units to the right.



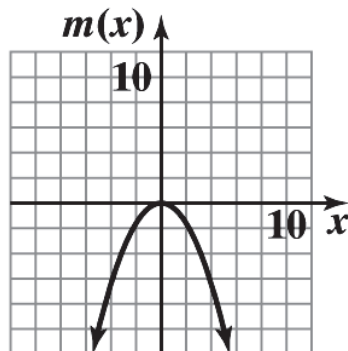
28. The graph of $m(x) = (x + 3)^2 + 4$ is the graph of $y = x^2$ shifted 3 units to the left and 4 units up.



30. The graph of $g(x) = -6 + \sqrt[3]{x}$ is the graph of $y = \sqrt[3]{x}$ shifted 6 units down.

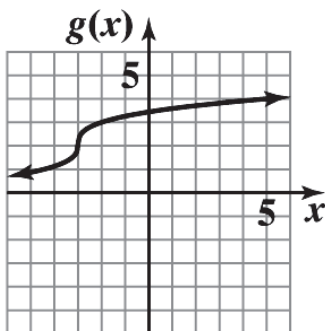


32. The graph of $m(x) = -0.4x^2$ is the graph of $y = x^2$ reflected in the x axis and vertically contracted by a factor of 0.4.

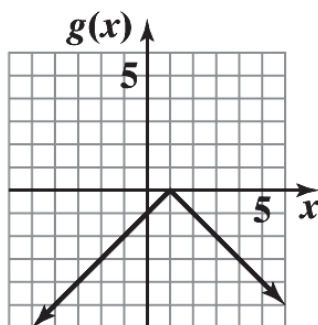


34. The graph of the basic function $y = |x|$ is shifted 3 units to the right and 2 units up. Equation: $y = |x - 3| + 2$
36. The graph of the basic function $y = |x|$ is reflected in the x axis, shifted 2 units to the left and 3 units up. Equation: $y = 3 - |x + 2|$
38. The graph of the basic function $\sqrt[3]{x}$ is reflected in the x axis and shifted up 2 units. Equation: $y = 2 - \sqrt[3]{x}$
40. The graph of the basic function $y = x^3$ is reflected in the x axis, shifted to the right 3 units and up 1 unit. Equation: $y = 1 - (x - 3)^3$

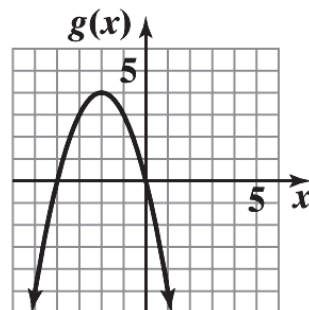
42. $g(x) = \sqrt[3]{x+3} + 2$



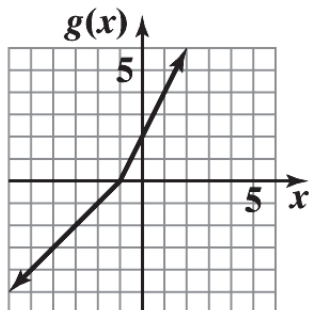
44. $g(x) = -|x - 1|$



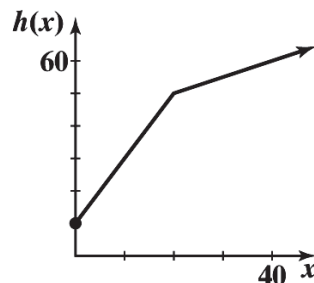
46. $g(x) = 4 - (x + 2)^2$



48. $g(x) = \begin{cases} x+1 & \text{if } x < -1 \\ 2+2x & \text{if } x \geq -1 \end{cases}$

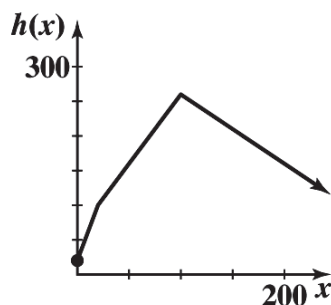


50. $h(x) = \begin{cases} 10+2x & \text{if } 0 \leq x \leq 20 \\ 40+0.5x & \text{if } x > 20 \end{cases}$



52.

$$h(x) = \begin{cases} 4x + 20 & \text{if } 0 \leq x \leq 20 \\ 2x + 60 & \text{if } 20 < x \leq 100 \\ -x + 360 & \text{if } x > 100 \end{cases}$$



54. The graph of the basic function $y = x$ is reflected in the x axis and vertically expanded by a factor of 2. Equation: $y = -2x$

56. The graph of the basic function $y = |x|$ is vertically expanded by a factor of 4. Equation: $y = 4|x|$

58. The graph of the basic function $y = x^3$ is vertically contracted by a factor of 0.25. Equation: $y = 0.25x^3$.

60. Vertical shift, reflection in y axis.

Reversing the order does not change the result. Consider a point (a, b) in the plane. A vertical shift of k units followed by a reflection in y axis moves (a, b) to $(a, b + k)$ and then to $(-a, b + k)$. In the reverse order, a reflection in y axis followed by a vertical shift of k units moves (a, b) to $(-a, b)$ and then to $(-a, b + k)$. The results are the same.

62. Vertical shift, vertical expansion.

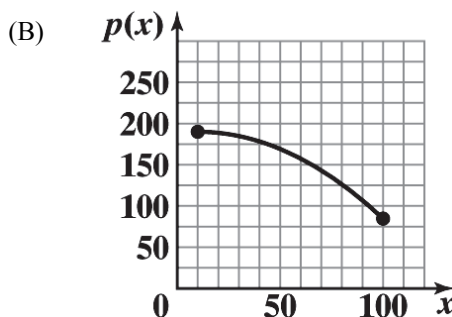
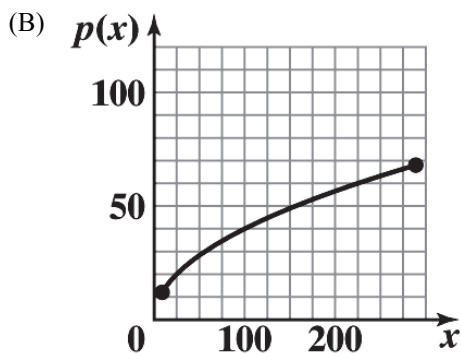
Reversing the order can change the result. For example, let (a, b) be a point in the plane. A vertical shift of k units followed by a vertical expansion of h ($h > 1$) moves (a, b) to $(a, b + k)$ and then to $(a, bh + kh)$. In the reverse order, a vertical expansion of h followed by a vertical shift of k units moves (a, b) to (a, bh) and then to $(a, bh + k)$; $(a, bh + kh) \neq (a, bh + k)$.

64. Horizontal shift, vertical contraction.

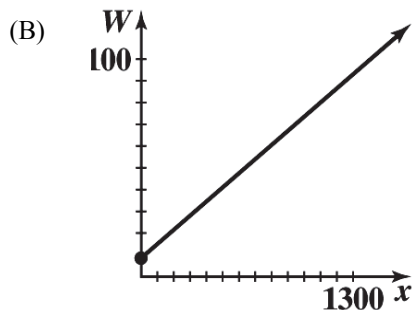
Reversing the order does not change the result. Consider a point (a, b) in the plane. A horizontal shift of k units followed by a vertical contraction of h ($0 < h < 1$) moves (a, b) to $(a + k, b)$ and then to $(a + k, bh)$. In the reverse order, a vertical contraction of h followed by a horizontal shift of k units moves (a, b) to (a, bh) and then to $(a + k, bh)$. The results are the same.

66. (A) The graph of the basic function $y = \sqrt{x}$ is vertically expanded by a factor of 4.

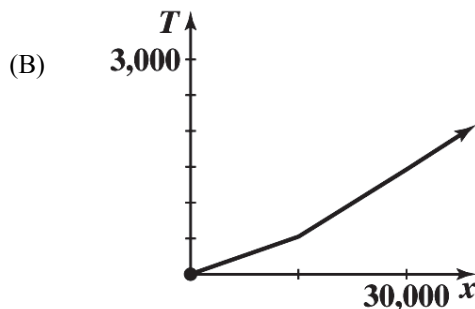
68. (A) The graph of the basic function $y = x^2$ is reflected in the x axis, vertically contracted by a factor of 0.013, and shifted 10 units to the right and 190 units up.



70. (A) Let x = number of kwh used in a winter month. For $0 \leq x \leq 700$, the charge is $8.5 + .065x$. At $x = 700$, the charge is \$54. For $x > 700$, the charge is $54 + .053(x - 700) = 16.9 + 0.053x$. Thus,
- $$W(x) = \begin{cases} 8.5 + .065x & \text{if } 0 \leq x \leq 700 \\ 16.9 + 0.053x & \text{if } x > 700 \end{cases}$$



72. (A) Let x = taxable income. If $0 \leq x \leq 15,000$, the tax due is $.035x$. At $x = 15,000$, the tax due is \$525. For $15,000 < x \leq 30,000$, the tax due is $525 + .0625(x - 15,000) = .0625x - 412.5$. For $x > 30,000$, the tax due is $1,462.5 + .0645(x - 30,000) = .0645x - 472.5$. Thus,

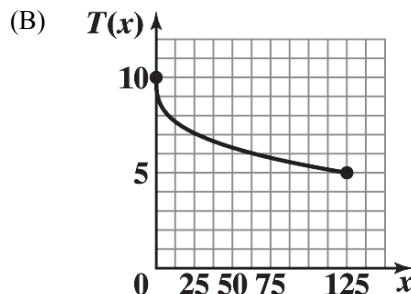
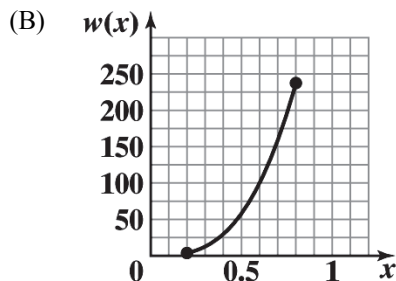


$$T(x) = \begin{cases} .035x & \text{if } 0 \leq x \leq 15,000 \\ .0625x - 412.5 & \text{if } 15,000 < x \leq 30,000 \\ .0645x - 472.5 & \text{if } x > 30,000 \end{cases}$$

- (C) $T(20,000) = \$837.50$
 $T(35,000) = \$1,785$

74. (A) The graph of the basic function $y = x^3$ is vertically expanded by a factor of 463.

76. (A) The graph of the basic function $y = \sqrt[3]{x}$ is reflected in the x axis and shifted up 10 units.



EXERCISE 2-3

2. $x^2 + 16x$ (standard form)
 $x^2 + 16x + 64 - 64$ (completing the square)
 $(x + 8)^2 - 64$ (vertex form)

4. $x^2 - 12x - 8$ (standard form)
 $(x^2 - 12x) - 8$
 $(x^2 - 12x + 36) + 8 - 36$ (completing the square)
 $(x - 6)^2 - 44$ (vertex form)

6. $3x^2 + 18x + 21$ (standard form)
 $3(x^2 + 6x) + 21$
 $3(x^2 + 6x + 9 - 9) + 21$ (completing the square)
 $3(x + 3)^2 + 21 - 27$
 $3(x + 3)^2 - 6$ (vertex form)
8. $-5x^2 + 15x - 11$ (standard form)
 $-5(x^2 - 3x) - 11$
 $-5(x^2 - 3x + \frac{9}{4} - \frac{9}{4}) - 11$ (completing the square)
 $-5(x - \frac{3}{2})^2 - 11 + \frac{45}{4}$
 $-5(x - \frac{3}{2})^2 + \frac{1}{4}$ (vertex form)
10. The graph of $g(x)$ is the graph of $y = x^2$ shifted right 1 unit and down 6 units; $g(x) = (x - 1)^2 - 6$.
12. The graph of $n(x)$ is the graph of $y = x^2$ reflected in the x axis, then shifted right 4 units and up 7 units;
 $n(x) = -(x - 4)^2 + 7$.
14. (A) g (B) m (C) n (D) f
16. (A) x intercepts: $-5, -1$; y intercept: -5 (B) Vertex: $(-3, 4)$
(C) Maximum: 4 (D) Range: $y \leq 4$ or $(-\infty, 4]$
18. (A) x intercepts: $1, 5$; y intercept: 5 (B) Vertex: $(3, -4)$
(C) Minimum: -4 (D) Range: $y \geq -4$ or $[-4, \infty)$
20. $g(x) = -(x + 2)^2 + 3$
(A) x intercepts: $-(x + 2)^2 + 3 = 0$
 $(x + 2)^2 = 3$
 $x + 2 = \pm\sqrt{3}$
 $x = -2 - \sqrt{3}, -2 + \sqrt{3}$
 y intercept: -1
(B) Vertex: $(-2, 3)$ (C) Maximum: 3 (D) Range: $y \leq 3$ or $(-\infty, 3]$
22. $n(x) = (x - 4)^2 - 3$
(A) x intercepts: $(x - 4)^2 - 3 = 0$
 $(x - 4)^2 = 3$
 $x - 4 = \pm\sqrt{3}$
 $x = 4 - \sqrt{3}, 4 + \sqrt{3}$
 y intercept: 13
(B) Vertex: $(4, -3)$ (C) Minimum: -3 (D) Range: $y \geq -3$ or $[-3, \infty)$

24. $y = -(x - 4)^2 + 2$

26. $y = [x - (-3)]^2 + 1$ or $y = (x + 3)^2 + 1$

28. $g(x) = x^2 - 6x + 5 = x^2 - 6x + 9 - 4 = (x - 3)^2 - 4$

(A) x intercepts: $(x - 3)^2 - 4 = 0$
 $(x - 3)^2 = 4$
 $x - 3 = \pm 2$
 $x = 1, 5$

y intercept: 5

(B) Vertex: $(3, -4)$ (C) Minimum: -4 (D) Range: $y \geq -4$ or $[-4, \infty)$

30. $s(x) = -4x^2 - 8x - 3 = -4\left[x^2 + 2x + \frac{3}{4}\right] = -4\left[x^2 + 2x + 1 - \frac{1}{4}\right]$
 $= -4\left[(x + 1)^2 - \frac{1}{4}\right] = -4(x + 1)^2 + 1$

(A) x intercepts: $-4(x + 1)^2 + 1 = 0$
 $4(x + 1)^2 = 1$
 $(x + 1)^2 = \frac{1}{4}$
 $x + 1 = \pm \frac{1}{2}$
 $x = -\frac{3}{2}, -\frac{1}{2}$

y intercept: -3

(B) Vertex: $(-1, 1)$ (C) Maximum: 1 (D) Range: $y \leq 1$ or $(-\infty, 1]$

32. $v(x) = 0.5x^2 + 4x + 10 = 0.5[x^2 + 8x + 20] = 0.5[x^2 + 8x + 16 + 4]$
 $= 0.5[(x + 4)^2 + 4]$
 $= 0.5(x + 4)^2 + 2$

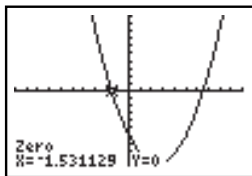
(A) x intercepts: none
 y intercept: 10

(B) Vertex: $(-4, 2)$ (C) Minimum: 2 (D) Range: $y \geq 2$ or $[2, \infty)$

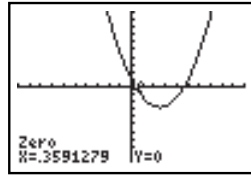
34. $g(x) = -0.6x^2 + 3x + 4$

(A) $g(x) = -2$: $-0.6x^2 + 3x + 4 = -2$
 $0.6x^2 - 3x - 6 = 0$

(B) $g(x) = 5$: $-0.6x^2 + 3x + 4 = 5$
 $-0.6x^2 + 3x - 1 = 0$
 $0.6x^2 - 3x + 1 = 0$

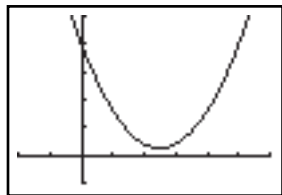


$x = -1.53, 6.53$



$x = 0.36, 4.64$

$$\begin{aligned}
 \text{(C) } g(x) &= 8: -0.6x^2 + 3x + 4 = 8 \\
 -0.6x^2 + 3x - 4 &= 0 \\
 0.6x^2 - 3x + 4 &= 0
 \end{aligned}$$



No solution

36. Using a graphing utility with $y = 100x - 7x^2 - 10$ and the calculus option with maximum command, we obtain 347.1429 as the maximum value.

$$\begin{aligned}
 38. \quad m(x) &= 0.20x^2 - 1.6x - 1 = 0.20(x^2 - 8x - 5) \\
 &= 0.20[(x - 4)^2 - 21] = 0.20(x - 4)^2 - 4.2
 \end{aligned}$$

(A) x intercepts:

$$0.20(x - 4)^2 - 4.2 = 0$$

$$(x - 4)^2 = 21$$

$$x - 4 = \pm\sqrt{21}$$

$$x = 4 - \sqrt{21} = -0.6, 4 + \sqrt{21} = 8.6;$$

y intercept: -1

(B) Vertex: $(4, -4.2)$ (C) Minimum: -4.2 (D) Range: $y \geq -4.2$ or $[-4.2, \infty)$

$$40. \quad n(x) = -0.15x^2 - 0.90x + 3.3 = -0.15(x^2 + 6x - 22) = -0.15[(x + 3)^2 - 31] = -0.15(x + 3)^2 + 4.65$$

(A) x intercepts:

$$-0.15(x + 3)^2 + 4.65 = 0$$

$$(x + 3)^2 = 31$$

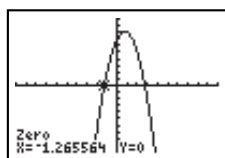
$$x + 3 = \pm\sqrt{31}$$

$$x = -3 - \sqrt{31} = -8.6, -3 + \sqrt{31} = 2.6;$$

y intercept: 3.30

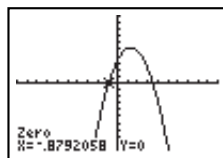
(B) Vertex: $(-3, 4.65)$ (C) Maximum: 4.65 (D) Range: $x \leq 4.65$ or $(-\infty, 4.65]$

42.



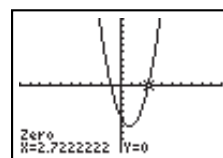
$$x = -1.27, 2.77$$

44.



$$-0.88 \leq x \leq 3.52$$

46.



$$x < -1 \text{ or } x > 2.72$$

48. f is a quadratic function and $\max f(x) = f(-3) = -5$

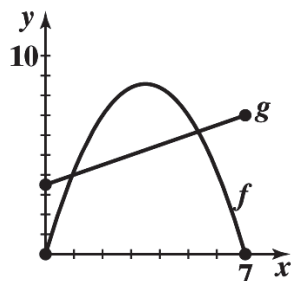
Axis: $x = -3$

Vertex: $(-3, -5)$

Range: $y \leq -5$ or $(-\infty, -5]$

x intercepts: None

50. (A)

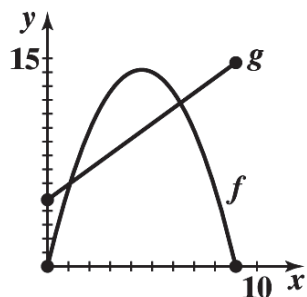


$$\begin{aligned} \text{(B) } f(x) &= g(x): -0.7x(x-7) = 0.5x + 3.5 \\ -0.7x^2 + 4.4x - 3.5 &= 0 \\ x &= \frac{-4.4 \pm \sqrt{(4.4)^2 - 4(0.7)(3.5)}}{-1.4} = 0.93, 5.35 \end{aligned}$$

$$\text{(C) } f(x) > g(x) \text{ for } 0.93 < x < 5.35$$

$$\text{(D) } f(x) < g(x) \text{ for } 0 \leq x < 0.93 \text{ or } 5.35 < x \leq 7$$

52. (A)



$$\begin{aligned} \text{(B) } f(x) &= g(x): -0.7x^2 + 6.3x = 1.1x + 4.8 \\ -0.7x^2 + 5.2x - 4.8 &= 0 \\ 0.7x^2 - 5.2x + 4.8 &= 0 \\ x &= \frac{-(-5.2) \pm \sqrt{(-5.2)^2 - 4(0.7)(4.8)}}{1.4} = 1.08, 6.35 \end{aligned}$$

$$\text{(C) } f(x) > g(x) \text{ for } 1.08 < x < 6.35$$

$$\text{(D) } f(x) < g(x) \text{ for } 0 \leq x < 1.08 \text{ or } 6.35 < x \leq 9$$

54. A quadratic with no real zeros will not intersect the x -axis.

56. Such an equation will have $b^2 - 4ac = 0$.

58. Such an equation will have $\frac{k}{a} < 0$.

$$\begin{aligned}
 60. \quad ax^2 + bx + c &= a(x-h)^2 + k \\
 &= a(x^2 - 2hx + h^2) + k \\
 &= ax^2 - 2ahx + ah^2 + k
 \end{aligned}$$

Equating constant terms gives

$k = c - ah^2$. Since h is the vertex,

we have $h = -\frac{b}{2a}$. Substituting

then gives

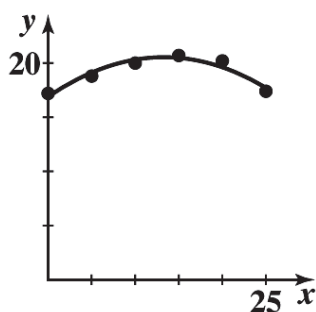
$$\begin{aligned}
 k &= c - ah^2 \\
 &= \frac{4ac - b^2}{4a}
 \end{aligned}$$

$$f(x) = -0.0169x^2 + 0.47x + 17.1$$

(A)

x	Mkt Share	$f(x)$
0	17.2	17.1
5	18.8	19.0
10	20.0	20.1
15	20.7	20.3
20	20.2	19.7
25	17.4	18.3
30	16.4	16.0

(B)



(C) For 2020, $x = 40$ and $f(40) = -0.0169(30)^2 + 0.47(40) + 17.1 = 8.9\%$

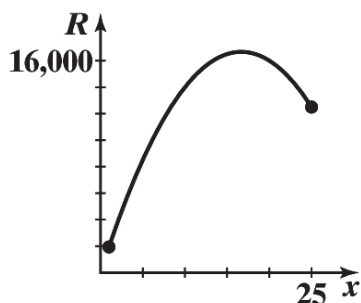
For 2025, $x = 45$ and $f(45) = -0.0169(45)^2 + 0.47(45) + 17.1 = 4.0\%$

(D) Market share rose from 17.2% in 1980 to a maximum of 20.7% in 1995 and then fell to 16.4% in 2010.

64. Verify

66.

(A)



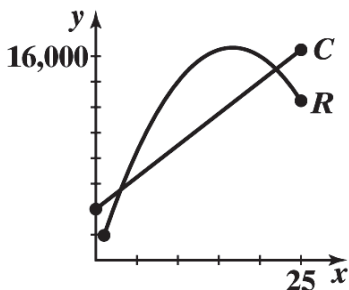
$$\begin{aligned}
 (B) \quad R(x) &= 2,000x - 60x^2 \\
 &= -60 \left(x^2 - \frac{100}{3}x \right) \\
 &= -60 \left[x^2 - \frac{100}{3}x + \frac{2500}{9} - \frac{2500}{9} \right] \\
 &= -60 \left[\left(x - \frac{50}{3} \right)^2 - \frac{2500}{9} \right] \\
 &= -60 \left(x - \frac{50}{3} \right)^2 + \frac{50,000}{3}
 \end{aligned}$$

16.667 thousand computers (16,667 computers);

16,666.667 thousand dollars (\$16,666,667)

(C) $2000 - 60(50/3) = \$1,000$

68. (A)
$$P\left(\frac{50}{3}\right) = 2,000 - 60\left(\frac{50}{3}\right) = \$1,000$$



(C) Loss: $1 \leq x < 3.035$ or $21.965 < x \leq 25$;
Profit: $3.035 < x < 21.965$

(B) $R(x) = C(x)$

$$x(2,000 - 60x) = 4,000 + 500x$$

$$2,000x - 60x^2 = 4,000 + 500x$$

$$60x^2 - 1,500x + 4,000 = 0$$

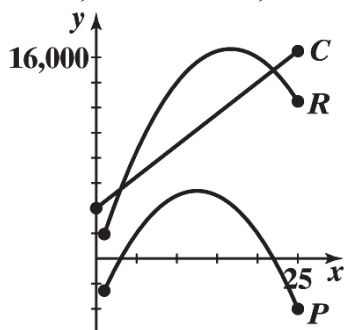
$$6x^2 - 150x + 400 = 0$$

$$x = 3.035, 21.965$$

 Break-even at 3.035 thousand (3,035) and 21.965 thousand (21,965)

70. (A) $P(x) = R(x) - C(x)$

$$= 1,500x - 60x^2 - 4,000$$



(B) and (C) Intercepts and break-even points: 3,035 computers and 21,965 computers

(D) and (E) Maximum profit is \$5,375,000 when 12,500 computers are produced. This is much smaller than the maximum revenue of \$16,666,667.

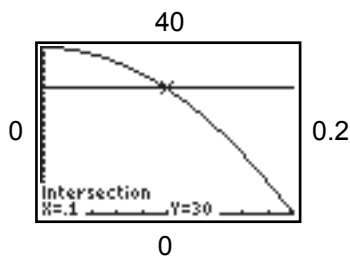
72. Solve: $f(x) = 1,000(0.04 - x^2) = 30$

$$40 - 1000x^2 = 30$$

$$1000x^2 = 10$$

$$x^2 = 0.01$$

$$x = 0.10 \text{ cm}$$



74.
$$\begin{array}{l} \text{QuadReg} \\ y = ax^2 + bx + c \\ a = 9.1428571 \times 10^{-7} \\ b = -.0069314286 \\ c = 16.69714286 \end{array}$$

For $x = 2,300$, the estimated fuel consumption is

$$y = a(2,300)^2 + b(2,300) + c = 5.6 \text{ mpg.}$$

EXERCISE 2-4

2. $f(x) = 72 + 12x$

(A) Degree: 1

$$\begin{aligned} \text{(B)} \quad 72 + 12x &= 0 \\ 12x &= -72 \\ x &= -6 \\ x\text{-intercept: } x &= -6 \end{aligned}$$

$$\begin{aligned} \text{(C)} \quad f(0) &= 72 - 12(0) = 72 \\ y\text{-intercept: } &72 \end{aligned}$$

$$4. \quad f(x) = x^3(x+5)$$

$$\text{(A)} \quad \text{Degree: } 4$$

$$\begin{aligned} \text{(B)} \quad x^3(x+5) &= 0 \\ x &= 0, -5 \\ x\text{-intercepts: } &0, -5 \end{aligned}$$

$$\begin{aligned} \text{(C)} \quad f(0) &= 0(0+5) = 0 \\ y\text{-intercept: } &0 \end{aligned}$$

$$6. \quad f(x) = x^2 - 4x - 5$$

$$\text{(A)} \quad \text{Degree: } 2$$

$$\begin{aligned} \text{(B)} \quad (x-5)(x+1) &= 0 \\ x &= -1, 5 \\ x\text{-intercepts: } &-1, 5 \end{aligned}$$

$$\begin{aligned} \text{(C)} \quad f(0) &= -5 \\ y\text{-intercept: } &-5 \end{aligned}$$

$$8. \quad f(x) = (x^2 - 4)(x^3 + 27)$$

$$\text{(A)} \quad \text{Degree: } 5$$

$$\begin{aligned} \text{(B)} \quad (x^2 - 4)(x^3 + 27) &= 0 \\ x &= -2, 2, -3 \\ x\text{-intercepts: } x &= -2, 2, -3 \end{aligned}$$

$$\begin{aligned} \text{(C)} \quad f(0) &= -4(27) = -108 \\ y\text{-intercept: } &-108 \end{aligned}$$

$$10. \quad f(x) = (x+3)^2(8x-4)^6$$

$$\text{(A)} \quad \text{Degree: } 8$$

$$\begin{aligned} \text{(B)} \quad (x+3)(8x-4) &= 0 \\ x &= -3, \frac{1}{2} \\ x\text{-intercepts: } &-3, 1/2 \end{aligned}$$

$$\text{(C)} \quad f(0) = 3^2(-4)^6 = 36,864$$

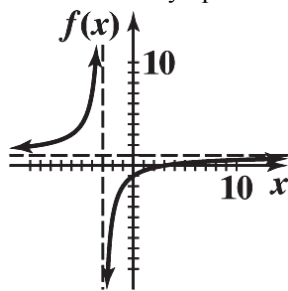
y-intercept: 36,864

12. (A) Minimum degree: 2
 (B) Negative – it must have even degree, and positive values in the domain are mapped to negative values in the range.
14. (A) Minimum degree: 3
 (B) Negative – it must have odd degree, and positive values in the domain are mapped to negative values in the range.
16. (A) Minimum degree: 4
 (B) Positive – it must have even degree, and positive values in the domain are mapped to positive values in the range.
18. (A) Minimum degree: 5
 (B) Positive – it must have odd degree, and positive values in the domain are mapped to positive values in the range.
20. A polynomial of degree 7 can have at most 7 x -intercepts.
22. A polynomial of degree 6 may have no x intercepts. For example, the polynomial $f(x) = x^6 + 1$ has no x -intercepts.
24. (A) Intercepts:

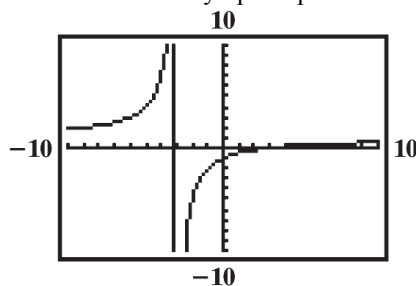
x -intercept(s): $x - 3 = 0$ $x = 3$ $(3, 0)$	y -intercept: $f(0) = \frac{0-3}{0+3} = -1$ $(0, -1)$
--	---

- (B) Domain: all real numbers except $x = -3$
 (C) Vertical asymptote at $x = -3$ by case 1 of the vertical asymptote procedure on page 90.
 Horizontal asymptote at $y = 1$ by case 2 of the horizontal asymptote procedure on page 90.

(D)



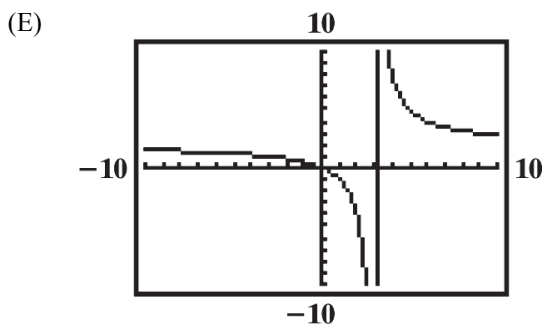
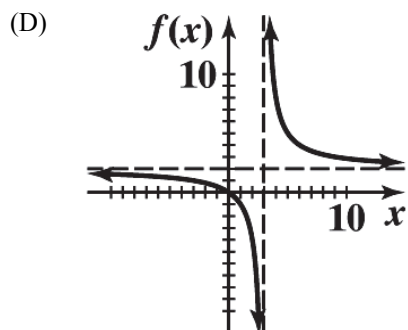
(E)



26. (A) Intercepts:

x -intercept(s): $2x = 0$ $x = 0$ $(0, 0)$	y -intercept: $f(0) = \frac{2(0)}{0-3} = 0$ $(0, 0)$
---	--

- (B) Domain: all real numbers except $x = 3$.
 (C) Vertical asymptote at $x = 3$ by case 1 of the vertical asymptote procedure on page 90.
 Horizontal asymptote at $y = 2$ by case 2 of the horizontal asymptote procedure on page 90.

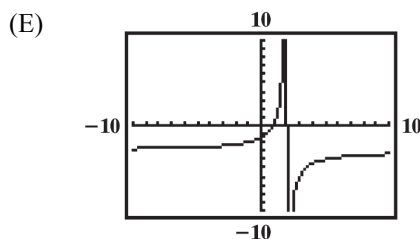
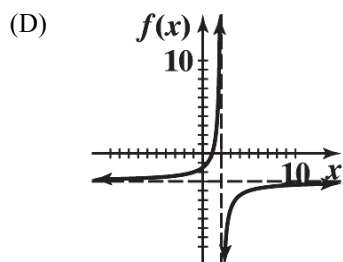


28. (A) Intercepts:

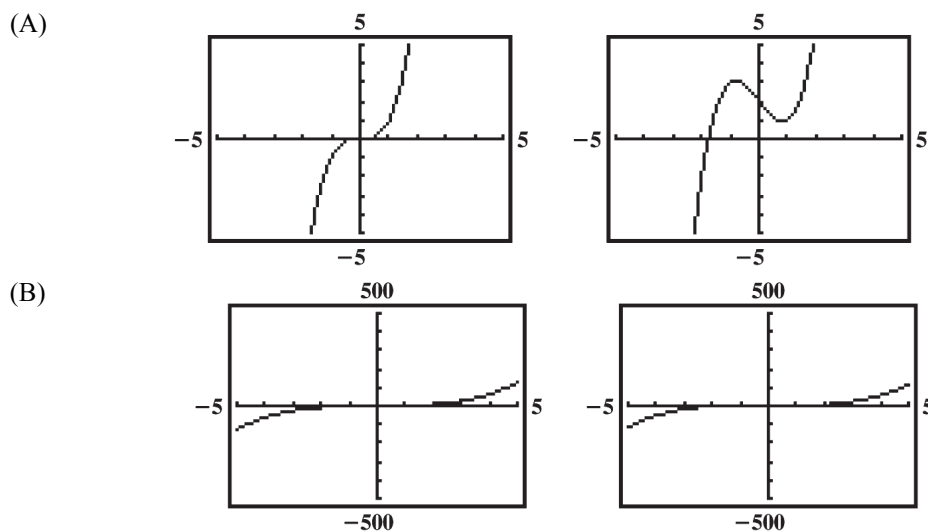
x -intercept: $3 - 3x = 0$ $x = 1$ $(1, 0)$	y -intercept: $f(0) = \frac{3 - 3(0)}{0 - 2} = -\frac{3}{2}$ $\left(0, -\frac{3}{2}\right)$
--	---

(B) Domain: all real numbers except $x = 2$

(C) Vertical asymptote at $x = 2$ by case 1 of the vertical asymptote procedure on page 90.
 Horizontal asymptote at $y = -3$ by case 2 of the horizontal asymptote procedure on page 90.

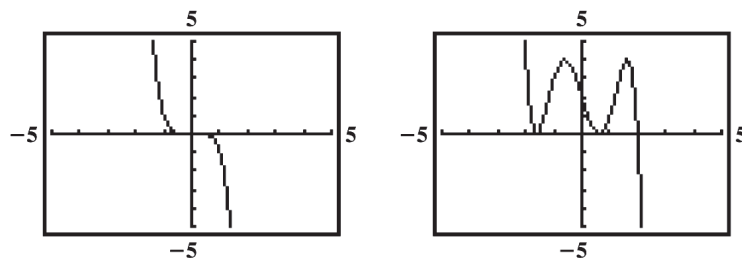


30.

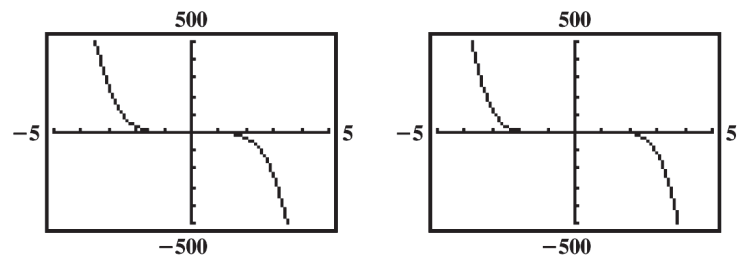


32.

(A)



(B)



34. $y = \frac{6}{4}$, by case 2 for horizontal asymptotes on page 90.

36. $y = -\frac{1}{2}$, by case 2 for horizontal asymptotes on page 90.

38. $y = 0$, by case 1 for horizontal asymptotes on page 90.

40. No horizontal asymptote, by case 3 for horizontal asymptotes on page 90.

42. Here we have denominator $(x^2 - 4)(x^2 - 16) = (x - 2)(x + 2)(x - 4)(x + 4)$. Since none of these linear terms are factors of the numerator, the function has vertical asymptotes at $x = 2$, $x = -2$, $x = 4$, and $x = -4$.

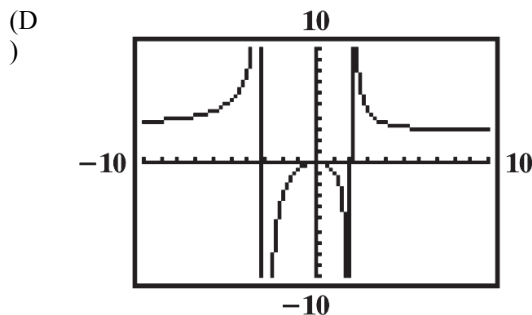
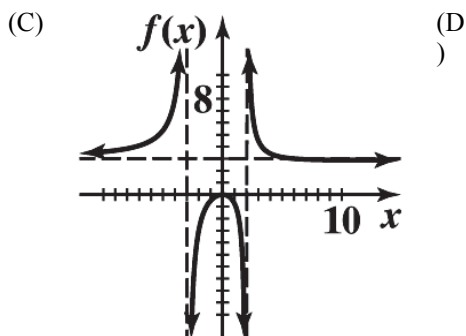
44. Here we have denominator $x^2 + 7x - 8 = (x - 1)(x + 8)$. Also, we have numerator $x^2 - 8x + 7 = (x - 1)(x - 7)$. By case 2 of the vertical asymptote procedure on page 90, we conclude that the function has a vertical asymptote at $x = -8$.

46. Here we have denominator $x^3 - 3x^2 + 2x = x(x^2 - 3x + 2) = x(x - 2)(x - 1)$. We also have numerator $x^2 + x - 2 = (x + 2)(x - 1)$. By case 2 of the vertical asymptote procedure on page 90, we conclude that the function has a vertical asymptotes at $x = 0$ and $x = 2$.

48. (A) Intercepts:

x-intercept(s):	y-intercept:
$3x^2 = 0$	$f(0) = 0$
$x = 0$	$(0, 0)$
$(0, 0)$	

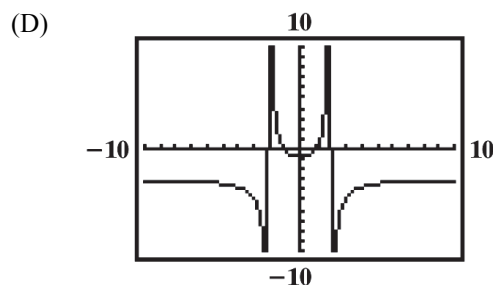
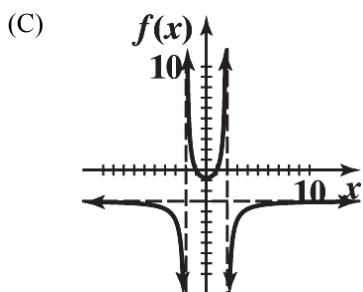
(B) Vertical asymptote when $x^2 + x - 6 = (x - 2)(x + 3) = 0$; so, vertical asymptotes at $x = 2$, $x = -3$. Horizontal asymptote $y = 3$.



50. (A) Intercepts:

x -intercept(s):	y -intercept:
$3 - 3x^2 = 0$	$f(0) = -\frac{3}{4}$
$3x^2 = 3$	$\left(0, -\frac{3}{4}\right)$
$x = \pm 1$	
$(1, 0), (-1, 0)$	

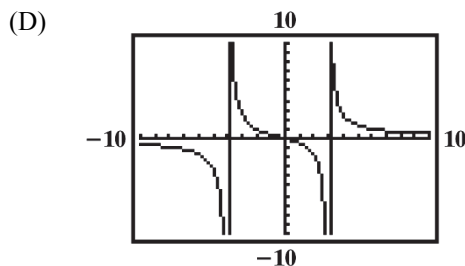
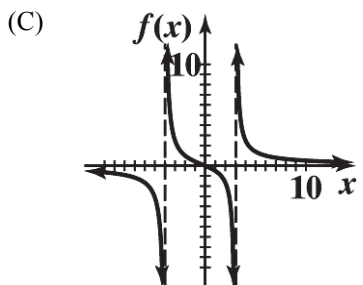
- (B) Vertical asymptotes when $x^2 - 4 = 0$; i.e. at $x = 2$ and $x = -2$.
Horizontal asymptote at $y = -3$



52. (A) Intercepts:

x -intercept(s):	y -intercept:
$5x - 10 = 0$	$f(0) = \frac{-10}{-12} = \frac{5}{6}$
$x = 2$	$(0, 5/6)$
$(2, 0)$	

- (B) Vertical asymptote when $x^2 + x - 12 = (x + 4)(x - 3) = 0$; i.e. when $x = -4$ and when $x = 3$.
Horizontal asymptote at $y = 0$.



54. $f(x) = -(x+2)(x-1) = -x^2 - x + 2$

56. $f(x) = x(x+1)(x-1) = x(x^2 - 1) = x^3 - x$

58. (A) We want $C(x) = mx + b$. Fixed costs are $b = \$300$ per day. Given $C(20) = 5,100$ we have

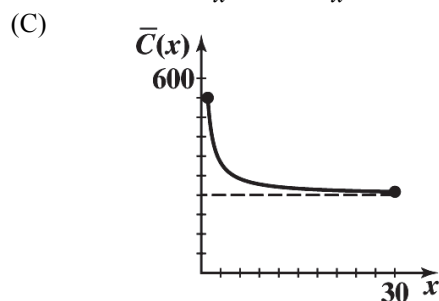
$$m(20) + 300 = 5,100$$

$$20m = 4800$$

$$m = 240$$

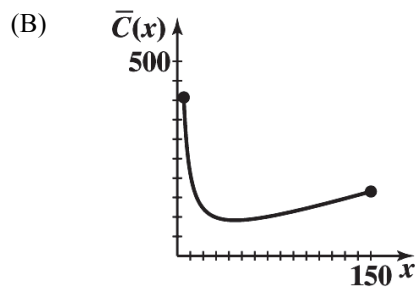
$$C(x) = 240x + 300$$

(B) $\bar{C}(x) = \frac{C(x)}{x} = \frac{240x + 300}{x} = 240 + \frac{300}{x}$

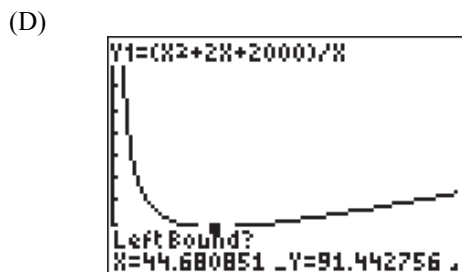


- (D) Average cost tends towards \$240 as production increases.

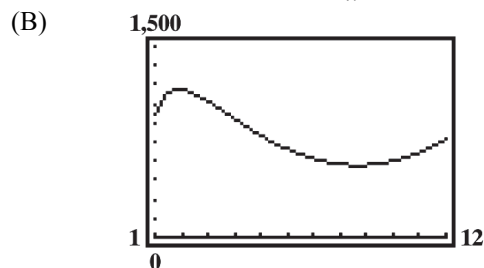
60. (A) $\bar{C}(x) = \frac{x^2 + 2x + 2,000}{x}$



- (C) A daily production level of $x = 45$ units per day, results in the lowest average cost of $\bar{C}(45) = \$91.44$ per unit.



62. (A) $\bar{C}(x) = \frac{20x^3 - 360x^2 + 2,300x - 1,000}{x}$



(C) A minimum average cost of \$566.84 is achieved at a production level of $x = 8.67$ thousand cases per month.

64. (A)

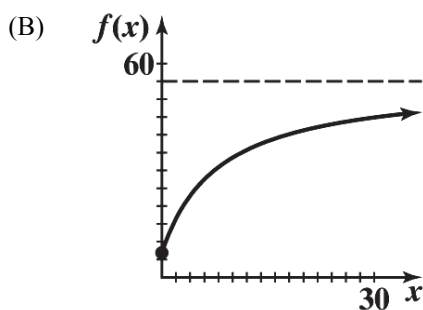
```

CubicReg
y=ax^3+bx^2+cx+d
a=-.0091111111
b=.5004761905
c=-7.655555556
d=269.3571429

```

(B) $y(42) = 156$ eggs

66. (A) The horizontal asymptote is $y = 55$.



68. (A)

```

CubicReg
y=ax^3+bx^2+cx+d
a=4.4444444E-5
b=-.0065833333
c=.2471031746
d=2.073809524

```

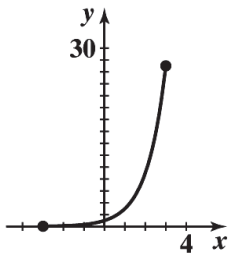
(B) This model gives an estimate of 2.5 divorces per 1,000 marriages.

EXERCISE 2-5

2. A. graph g B. graph f C. graph h D. graph k

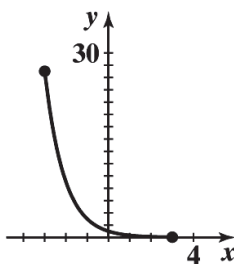
4. $y = 3^x; [-3, 3]$

x	y
-3	$\frac{1}{27}$
-1	$\frac{1}{3}$
0	1
1	3
3	27



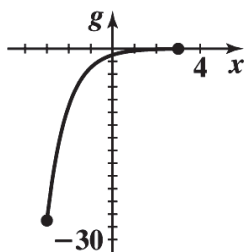
6. $y = 3^{-x}; [-3, 3]$

x	y
-3	27
-1	3
0	1
1	$\frac{1}{3}$
3	$\frac{1}{27}$



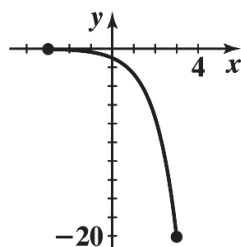
8. $g(x) = -3^{-x}; [-3, 3]$

x	$g(x)$
-3	-27
-1	-3
0	-1
1	$-\frac{1}{3}$
3	$-\frac{1}{27}$



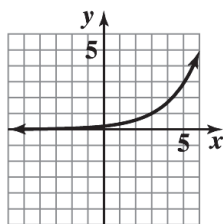
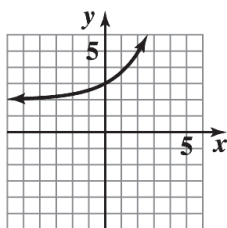
10. $y = -e^x; [-3, 3]$

x	y
-3	≈ -0.05
-1	≈ -0.37
0	-1
1	≈ -2.72
3	≈ -20.09

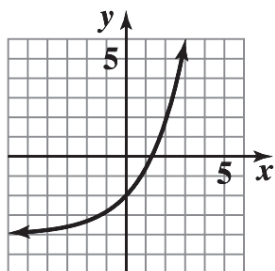
12. The graph of g is the graph of f shifted 2 units to the right.14. The graph of g is the graph of f reflected in the x axis.16. The graph of g is the graph of f shifted 2 units down.18. The graph of g is the graph of f vertically contracted by a factor of 0.5 and shifted 1 unit to the right.

20. A. $y = f(x) + 2$

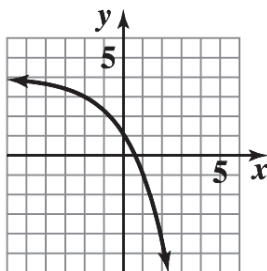
B. $y = f(x - 3)$



C. $y = 2f(x) - 4$

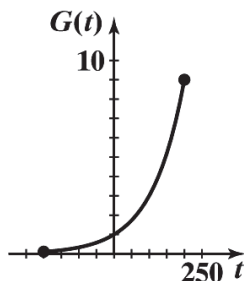


D. $y = 4 - f(x+2)$



22. $G(t) = 3^{\frac{t}{100}}; [-200, 200]$

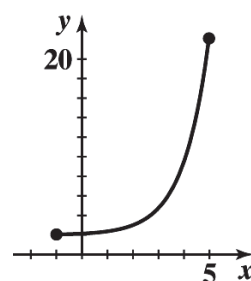
x	$G(t)$
-200	$\frac{1}{9}$
-100	$\frac{1}{3}$
0	1
100	3
200	9



24.

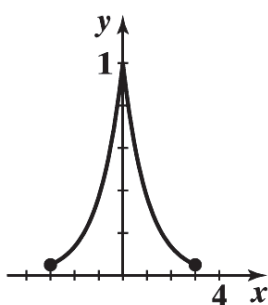
$y = 2 + e^{x-2}; [-1, 5]$

x	y
-1	≈ 2.05
0	≈ 2.14
1	≈ 2.37
3	≈ 4.72
5	≈ 22.09



26. $y = e^{-|x|}; [-3, 3]$

x	y
-3	≈ 0.05
-1	≈ 0.37
0	1
1	≈ 0.37
3	≈ 0.05



28. $a = 2$, $b = -2$ for example. The exponential function property: For $x \neq 0$, $a^x = b^x$ if and only if $a = b$ assumes $a > 0$ and $b > 0$.

30. $5^{3x} = 5^{4x-2}$

$3x = 4x - 2$

$-x = -2$

$x = 2$

32.

$7^{x^2} = 7^{2x+3}$

$x^2 = 2x + 3$

$x^2 - 2x - 3 = 0$

$(x-3)(x+1) = 0$

$x = -1, 3$

34. $(1-x)^5 = (2x-1)^5$

$1-x = 2x-1$

$-3x = -2$

$x = \frac{2}{3}$

36. $10xe^x - 5e^x = 0$

$e^x(10x-5) = 0$

$10x-5 = 0$ (since $e^x \neq 0$)

$x = 1/2$

38. $x^2e^{-x} - 9e^{-x} = 0$

$e^{-x}(x^2-9) = 0$

$(x^2-9) = 0$ (since $e^{-x} \neq 0$)

$x = -3, 3$

40. $e^{4x} + e > 0$ for all x ;

$e^{4x} + e = 0$ has no solutions.

42. $e^{3x-1} - e = 0$

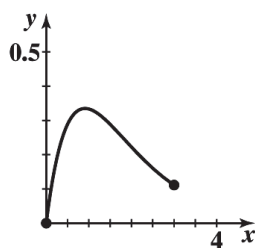
$e^{3x-1} = e^1$

$3x-1 = 1$

$x = 2/3$

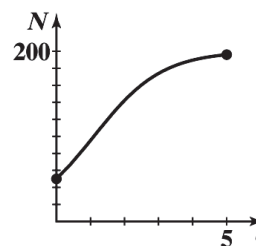
44. $m(x) = x(3^{-x}); [0, 3]$

x	$m(x)$
0	0
1	$\frac{1}{3}$
2	$\frac{2}{9}$
3	$\frac{1}{9}$



46. $N = \frac{200}{1 + 3e^{-t}}; [0, 5]$

x	N
0	50
1	≈ 95.07
2	≈ 142.25
3	≈ 174.01
4	≈ 189.58
5	≈ 196.04



48. $A = Pe^{rt}$

$$A = (24,000)e^{(0.0435)(7)}$$

$$A = (24,000)e^{0.3045}$$

$$A = (24,000)(1.35594686)$$

$$A = \$32,542.72$$

50. (A) $A = P(1 + \frac{r}{m})^{mt}$

$$A = 4000(1 + \frac{0.06}{52})^{(52)(0.5)}$$

$$A = 4000(1.0011538462)^{26}$$

$$A = 4000(1.030436713)$$

$$A = \$4121.75$$

(B) $A = P(1 + \frac{r}{m})^{mt}$

$$A = 4000(1 + \frac{0.06}{52})^{(52)(10)}$$

$$A = 4000(1.0011538462)^{520}$$

$$A = 4000(1.821488661)$$

$$A = \$7285.95$$

52. $A = P(1 + \frac{r}{m})^{mt}$

$$40,000 = P(1 + \frac{0.055}{365})^{(365)(17)}$$

$$40,000 = P(1.0001506849)^{6205}$$

$$40,000 = P(2.547034043)$$

$$P = \$15,705$$

54. (A) $A = P(1 + \frac{r}{m})^{mt}$

$$A = 10,000(1 + \frac{0.0135}{4})^{(4)(5)}$$

$$A = 10,000(1.003375)^{20}$$

$$A = 10,000(1.069709)$$

$$A = \$10,697.09$$

(B) $A = P(1 + \frac{r}{m})^{mt}$

$$A = 10,000(1 + \frac{0.0130}{12})^{(12)(5)}$$

$$A = 10,000(1.00108333)^{60}$$

$$A = 10,000(1.067121479)$$

$$A = \$10,671.21$$

(C) $A = P(1 + \frac{r}{m})^{mt}$

$$A = 10,000(1 + \frac{0.0125}{365})^{(365)(5)}$$

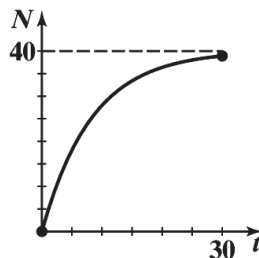
$$A = 10,000(1.000034247)^{1825}$$

$$A = 10,000(1.06449332)$$

$$A = \$10,644.93$$

56. $N = 40(1 - e^{-0.12t}); [0, 30]$

x	N
0	0
10	≈ 27.95
20	≈ 36.37
30	≈ 38.91



The maximum number of boards an average employee can be expected to produce in 1 day is 40.

58.

```
ExpReg
y=a*b^x
a=1008.958664
b=1.098151058
```



(A) The average salary in 2022: $y(32) \approx \$20,186,000$.

(B) The model gives an average salary of $y(7) \approx \$1,943,000$ in 1997.

60. (A) $I(50) = I_0 e^{-0.00942(50)} \approx 62\%$ (B) $I(100) = I_0 e^{-0.00942(100)} \approx 39\%$

62. (A) $P = 94e^{0.032t}$

(B) Population in 2025: $P(13) = 94e^{0.032(13)} \approx 142,000,000$;

Population in 2035: $P(23) = 94e^{0.032(23)} \approx 196,000,000$.

64.

```
ExpReg
y=a*b^x
a=71.63144793
b=1.002343596
```



Life expectancy for a person born in 2025: $y(55) \approx 81.5$ years.

EXERCISE 2-6

2. $\log_2 32 = 5 \Rightarrow 32 = 2^5$ 4. $\log_e 1 = 0 \Rightarrow e^0 = 1$ 6. $\log_9 27 = \frac{3}{2} \Rightarrow 27 = 9^{3/2}$ 8. $36 = 6^2 \Rightarrow \log_6 36 = 2$

10. $9 = 27^{2/3} \Rightarrow \log_{27} 9 = \frac{2}{3}$ 12. $M = b^x \Rightarrow \log_b M = x$ 14. $\log_{10} 100,000 = \log_{10} 10^5 = 5$ 16. $\log_3 \frac{1}{3} = \log_3 3^{-1} = -1$

18. $\log_4 1 = \log_4 4^0 = 0$ 20. $\ln e^{-5} = -5$ 22. $\log_b FG = \log_b F + \log_b G$ 24. $\log_b w^{15} = 15 \log_b w$

26. $\frac{\log_3 P}{\log_3 R} = \log_R P$	28. $\log_2 x = 2$	30. $\log_3 27 = y$	32. $\log_b e^{-2} = -2$	34. $\log_{25} x = \frac{1}{2}$
	$2^2 = x$	$3^y = 27$	$e^{-2} = b^{-2}$	$25^{1/2} = x$
	$4 = x$	$3^y = 3^3$	$e = b$	$5 = x$
		$y = 3$		

36. False; an example of a polynomial function of odd degree that is not one-to-one is $f(x) = x^3 - x$.
 $f(-1) = f(0) = f(1) = 0$.

38. True; the graph of every function (not necessarily one-to-one) intersects each vertical line exactly once.

40. False; $x = -1$ is in the domain of f , but cannot be in the range of g .

42. True; since g is the inverse of f , then (a, b) is on the graph of f if and only if (b, a) is on the graph of g .
 Therefore, f is also the inverse of g .

44. $\log_b x = \frac{2}{3} \log_b 27 + 2 \log_b 2 - \log_b 3$ 46. $\log_b x = 3 \log_b 2 + \frac{1}{2} \log_b 25 - \log_b 20$

$\log_b x = \log_b 27^{2/3} + \log_b 2^2 - \log_b 3$ $\log_b x = \log_b 2^3 + \log_b 25^{1/2} - \log_b 20$

$\log_b x = \log_b 9 + \log_b 4 - \log_b 3$ $\log_b x = \log_b 8 + \log_b 5 - \log_b 20$

$\log_b x = \log_b \frac{(9)(4)}{3}$ $\log_b x = \log_b \frac{(8)(5)}{20}$

$\log_b x = \log_b 12$ $\log_b x = \log_b 2$
 $x = 12$ $x = 2$

48. $\log_b(x+2) + \log_b x = \log_b 24$

$$\log_b(x+2)x = \log_b 24$$

$$\log_b(x^2 + 2x) = \log_b 24$$

$$x^2 + 2x = 24$$

$$x^2 + 2x - 24 = 0$$

$$(x+6)(x-4) = 0$$

$$x = -6, 4$$

Since the domain of a logarithmic function is $(0, \infty)$, omit the negative solution.

Therefore, the solution is $x = 4$.

50. $\log_{10}(x+6) - \log_{10}(x-3) = 1$

$$\log_{10} \frac{x+6}{x-3} = 1$$

$$10^1 = \frac{x+6}{x-3}$$

$$10(x-3) = x+6$$

$$10x - 30 = x + 6$$

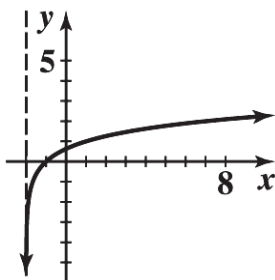
$$x = 4$$

52. $y = \log_3(x+2)$

$$3^y = x+2$$

$$3^y - 2 = x$$

x	y
$-\frac{53}{27}$	-3
$-\frac{17}{9}$	-2
$-\frac{5}{3}$	-1
-1	0
1	1
7	2
25	3



54. The graph of $y = \log_3(x+2)$ is the graph of $y = \log_3 x$ shifted to the left 2 units.

56. The domain of logarithmic function is defined for positive values only. Therefore, the domain of the function is $x-1 > 0$ or $x > 1$. The range of a logarithmic function is all real numbers. In interval notation the domain is $(1, \infty)$ and the range is $(-\infty, \infty)$.

58. A. $\log 72.604 = 1.86096$
 B. $\log 0.033041 = -1.48095$
 C. $\ln 40,257 = 10.60304$
 D. $\ln 0.0059263 = -5.12836$

60. A. $\log x = 2.0832$

$$x = \log^{-1}(2.0832) = 10^{2.0832}$$

$$x = 121.1156$$

B. $\log x = -1.1577$

$$x = \log^{-1}(-1.1577) = 10^{-1.1577}$$

$$x = 0.0696$$

C. $\ln x = 3.1336$

$$x = \ln^{-1}(3.1336) = e^{3.1336}$$

$$x = 22.9565$$

D. $\ln x = -4.3281$

$$x = \ln^{-1}(-4.3281) = e^{-4.3281}$$

$$x = 0.0132$$

62. $10^x = 153$

$$\log 10^x = \log 153$$

$$x = 2.1847$$

64. $e^x = 0.3059$

$$\ln e^x = \ln 0.3059$$

$$x = -1.1845$$

66. $1.02^{4t} = 2$

$$\ln 1.02^{4t} = \ln 2$$

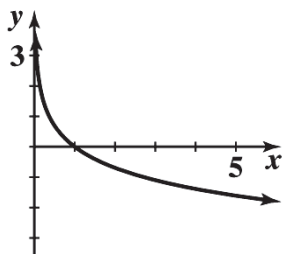
$$4t \ln 1.02 = \ln 2$$

$$t = \frac{\ln 2}{4 \ln 1.02}$$

$$t = 8.7507$$

68. $y = -\ln x; x > 0$

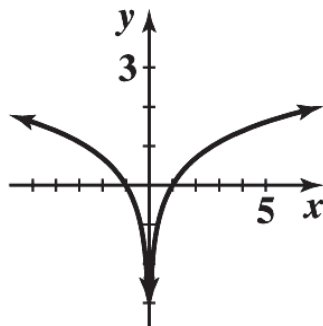
x	y
0.5	≈ 0.69
1	0
2	≈ -0.69
4	≈ -1.39
5	≈ -1.61



Based on the graph above, the function is decreasing on the interval $(0, \infty)$.

70. $y = \ln|x|$

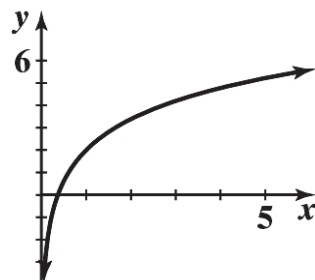
x	y
-5	≈ 1.61
-2	≈ 0.69
1	0
2	≈ 0.69
5	≈ 1.61



Based on the graph above, the function is decreasing on the interval $(-\infty, 0)$ and increasing on the interval $(0, \infty)$.

72. $y = 2 \ln x + 2$

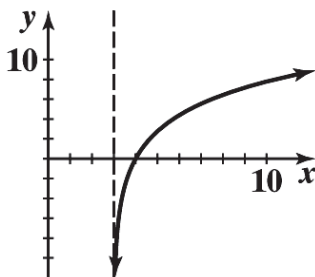
x	y
0.5	≈ 0.61
1	2
2	≈ 3.39
4	≈ 4.77
5	≈ 5.22



Based on the graph above, the function is increasing on the interval $(0, \infty)$.

74. $y = 4\ln(x - 3)$

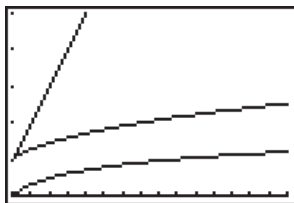
x	y
4	0
6	≈ 4.39
8	≈ 6.44
10	≈ 7.78
12	≈ 8.79



Based on the graph above, the function is increasing on the interval $(3, \infty)$.

76. It is not possible to find a power of 1 that is an arbitrarily selected real number, because 1 raised to any power is 1.

78.



A function f is “smaller than” a function g on an interval $[a, b]$ if $f(x) < g(x)$ for $a \leq x \leq b$. Based on the graph above, $\log x < \sqrt[3]{x} < x$ for $1 < x \leq 16$.

80. Use the compound interest formula: $A = P(1 + r)^t$. The problem is asking for the original amount to double, therefore $A = 2P$.

$$2P = P(1 + 0.0958)^t$$

$$2 = (1.0958)^t$$

$$\ln 2 = \ln(1.0958)^t$$

$$\ln 2 = t \ln(1.0958)$$

$$\frac{\ln 2}{\ln 1.0958} = t$$

$$7.58 \approx t$$

It will take approximately 8 years for the original amount to double.

82. Use the compound interest formula:

$$A = P\left(1 + \frac{r}{m}\right)^{mt}$$

$$(A) \quad 7500 = 5000\left(1 + \frac{0.08}{2}\right)^{2t}$$

$$1.5 = (1.04)^{2t}$$

$$\ln 1.5 = \ln(1.04)^{2t}$$

$$\ln 1.5 = 2t \ln(1.04)$$

$$\frac{\ln 1.5}{2 \ln 1.04} = t$$

$$5.17 \approx t$$

It will take approximately 5.17 years for \$5000 to grow to \$7500 if compounded semiannually.

$$(B) \quad 7500 = 5000\left(1 + \frac{0.08}{12}\right)^{12t}$$

$$1.5 = (1.0066667)^{12t}$$

$$\ln 1.5 = \ln(1.0066667)^{12t}$$

$$\ln 1.5 = 12t \ln(1.0066667)$$

$$\frac{\ln 1.5}{12 \ln 1.0066667} = t$$

$$5.09 \approx t$$

It will take approximately 5.09 years for \$5000 to grow to \$7500 if compounded monthly.

It will take approximately 5.09 years for \$5000 to grow to \$7500 if compounded monthly.

84. Use the compound interest formula: $A = Pe^{rt}$.

$$41,000 = 17,000e^{0.0295t}$$

$$\frac{41}{17} = e^{0.0295t}$$

$$\ln \frac{41}{17} = \ln e^{0.0295t}$$

$$\ln \frac{41}{17} = 0.0295t$$

$$\frac{\ln \frac{41}{17}}{0.0295} = t$$

$$29.84 \approx t$$

It will take approximately 29.84 years for \$17,000 to grow to \$41,000 if compounded continuously.

86. Equilibrium occurs when supply and demand are equal. The models from Problem 85 have the demand and supply functions defined by $y = 256.4659159 - 24.03812068 \ln x$ and

$y = -127.8085281 + 20.01315349 \ln x$, respectively. Set both equations equal to each other to yield:

$$256.4659159 - 24.03812068 \ln x = -127.8085281 + 20.01315349 \ln x$$

$$384.274444 = 44.05127417 \ln x$$

$$\frac{384.274444}{44.05127417} = \ln x$$

$$e^{384.274444/44.05127417} = e^{\ln x}$$

$$6145 \approx x$$

Substitute the value above into either equation.

$$y = 256.4659159 - 24.03812068 \ln x$$

$$y = 256.4659159 - 24.03812068 \ln(6145)$$

$$y = 256.4659159 - 24.03812068(8.723394022)$$

$$y = 46.77$$

Therefore, equilibrium occurs when 6145 units are produced and sold at a price of \$46.77.

88. (A) $N = 10 \log \frac{I}{I_0} = 10 \log \frac{10^{-13}}{10^{-16}} = 10 \log 10^3 = 30$

(B) $N = 10 \log \frac{I}{I_0} = 10 \log \frac{3.16 \times 10^{-10}}{10^{-16}} = 10 \log 3.16 \times 10^6 \approx 65$

(C) $N = 10 \log \frac{I}{I_0} = 10 \log \frac{10^{-8}}{10^{-16}} = 10 \log 10^8 = 80$

(D) $N = 10 \log \frac{I}{I_0} = 10 \log \frac{10^{-1}}{10^{-16}} = 10 \log 10^{15} = 150$

90.

```
LnReg
y=a+blnx
a=-45845.97493
b=12130.89096
```

2024: $t = 124$; $y(124) \approx 12,628$. Therefore, according to the model, the total production in the year 2024 will be approximately 12,628 million bushels.

92. $A = A_0 e^{-0.000124t}$

$$0.1A_0 = A_0 e^{-0.000124t}$$

$$0.1 = e^{-0.000124t}$$

$$\ln 0.1 = \ln e^{-0.000124t}$$

$$\ln 0.1 = -0.000124t$$

$$18,569 \approx t$$

If 10% of the original amount is still remaining, the skull would be approximately 18,569 years old.

Name _____ Date _____ Class _____

Section 2-1 Functions

Goal: To evaluate function values and to determine the domain of functions

The domain of the following functions will be the set of real numbers unless it meets one of the following conditions:

1. The function contains a fraction whose denominator has a variable.
The domain of such a function is the set of real numbers EXCEPT the values of the variable that make the denominator zero.
2. The function contains an even root (square root $\sqrt{\quad}$, fourth root $\sqrt[4]{\quad}$, etc.).
The domain of such a function is limited to values of the variable that make the radicand (the part under the radical) greater than or equal to 0.

1. Evaluate the following function at the specified values of the independent variable and simplify the results.

$$f(x) = 4x - 5$$

a) $f(1) = 4(1) - 5$	b) $f(-3) = 4(-3) - 5$
$f(1) = 4 - 5$	$f(-3) = -12 - 5$
$f(1) = -1$	$f(-3) = -17$
c) $f(x-1) = 4(x-1) - 5$	d) $f\left(\frac{1}{4}\right) = 4\left(\frac{1}{4}\right) - 5$
$f(x-1) = 4x - 4 - 5$	$f\left(\frac{1}{4}\right) = 1 - 5$
$f(x-1) = 4x - 9$	$f\left(\frac{1}{4}\right) = -4$

In problems 2–10 evaluate the given function for $f(x) = x^2 + 1$ and $g(x) = x - 4$.

2. $(f + g)(3) = f(3) + g(3)$	$f(3) = (3)^2 + 1$	$g(3) = 3 - 4$
$= 10 + (-1)$	$f(3) = 9 + 1$	$g(3) = -1$
$(f + g)(3) = 9$	$f(3) = 10$	

$$\begin{aligned}
 3. \quad (f-g)(2c) &= f(2c) - g(2c) & f(2c) &= (2c)^2 + 1 & g(2c) &= 2c - 4 \\
 &= 4c^2 + 1 - (2c - 4) & f(2c) &= 4c^2 + 1 & & \\
 (f-g)(2c) &= 4c^2 - 2c + 5
 \end{aligned}$$

$$\begin{aligned}
 4. \quad (fg)(-4) &= f(-4)g(-4) & f(-4) &= (-4)^2 + 1 & g(-4) &= -4 - 4 \\
 &= (17)(-8) & f(-4) &= 16 + 1 & g(-4) &= -8 \\
 (fg)(-4) &= -136 & f(-4) &= 17 & &
 \end{aligned}$$

$$\begin{aligned}
 5. \quad \left(\frac{f}{g}\right)(0) &= \frac{f(0)}{g(0)} & f(0) &= (0)^2 + 1 & g(0) &= 0 - 4 \\
 &= \frac{1}{-4} & f(0) &= 0 + 1 & g(0) &= -4 \\
 & & f(0) &= 1 & & \\
 \left(\frac{f}{g}\right)(0) &= -\frac{1}{4}
 \end{aligned}$$

$$\begin{aligned}
 6. \quad 2 \cdot g(-2) &= 2(-6) & g(-2) &= -2 - 4 \\
 2 \cdot g(-2) &= -12 & g(-2) &= -6
 \end{aligned}$$

$$\begin{aligned}
 7. \quad 3 \cdot f(4) - 2 \cdot g(-1) &= 3(17) - 2(-5) & f(4) &= (4)^2 + 1 & g(-1) &= -1 - 4 \\
 &= 51 + 10 & f(4) &= 16 + 1 & g(-1) &= -5 \\
 3 \cdot f(4) - 2 \cdot g(-1) &= 61 & f(4) &= 17 & &
 \end{aligned}$$

$$\begin{aligned}
 8. \quad \frac{f(3) - g(2)}{f(1)} &= \frac{10 - (-2)}{2} & f(3) &= (3)^2 + 1 & f(1) &= (1)^2 + 1 & g(2) &= 2 - 4 \\
 &= \frac{12}{2} & f(3) &= 9 + 1 & f(1) &= 1 + 1 & g(2) &= -2 \\
 & & f(3) &= 10 & f(1) &= 2 & & \\
 \frac{f(3) - g(2)}{f(1)} &= 6
 \end{aligned}$$

$$\begin{aligned}
 9. \quad \frac{g(-1+h)-g(-1)}{h} &= \frac{h-5-(-5)}{h} & g(-1+h) &= -1+h-4 & g(-1) &= -1-4 \\
 &= \frac{h}{h} & g(-1+h) &= h-5 & g(-1) &= -5 \\
 \frac{g(-1+h)-g(-1)}{h} &= 1
 \end{aligned}$$

$$\begin{aligned}
 10. \quad \frac{f(2+h)-f(2)}{h} &= \frac{h^2+4h+5-(5)}{h} & f(2+h) &= (2+h)^2+1 & f(2) &= (2)^2+1 \\
 &= \frac{h^2+4h}{h} & f(2+h) &= h^2+4h+4+1 & f(2) &= 4+1 \\
 & & f(2+h) &= h^2+4h+5 & f(2) &= 5 \\
 \frac{f(2+h)-f(2)}{h} &= h+4
 \end{aligned}$$

In problems 11–18 find the domain of each function.

$$11. \quad g(x) = \frac{5}{x-2}$$

The domain is restricted by the denominator. Since it cannot equal zero, the domain is all real numbers except 2.

$$12. \quad f(x) = \frac{2x}{3x+7}$$

The domain is restricted by the denominator. Since it cannot equal zero, the domain is all real numbers except $-\frac{7}{3}$.

$$13. \quad h(t) = \sqrt[4]{1-2t}$$

The domain is restricted by the radicand since it has an even root. Since the radicand must be greater than or equal to zero, the domain is $t \leq \frac{1}{2}$.

$$14. \quad g(x) = 1-2x^2$$

There are no restrictions on the domain, therefore the domain is all real numbers.

15. $f(x) = \sqrt[3]{x+4}$

There are no restrictions on the domain since it has an odd root, therefore the domain is all real numbers.

16. $h(w) = \sqrt{w-3}$

The domain is restricted by the radicand since it has an even root. Since the radicand must be greater than or equal to zero, the domain is $w \geq 3$.

17. $f(x) = 2x^3 + 5x^2 - x + 17$

There are no restrictions on the domain, therefore the domain is all real numbers.

18. $g(x) = \frac{2x^3}{5}$

There are no restrictions on the domain since there is no variable in the denominator, therefore the domain is all real numbers.

Name _____ Date _____ Class _____

Section 2-2 Elementary Function: Graphs and Transformations

Goal: To describe the shapes of graphs based on vertical and horizontal shifts and reflections, stretches, and shrinks

Basic Elementary Functions:

$f(x) = x$	Identity function
$h(x) = x^2$	Square function
$m(x) = x^3$	Cube function
$n(x) = \sqrt{x}$	Square root function
$p(x) = \sqrt[3]{x}$	Cube root function
$g(x) = x $	Absolute value function

In problems 1–14 describe how the graph of each function is related to the graph of one of the six basic functions. State the domain of each function. (Do not use a graphing calculator and do not make a chart.)

1. $g(x) = x^2 - 4$

The graph is the square function that is shifted down 4 units. There are no restrictions on the domain, therefore, the domain is all real numbers.

2. $f(x) = \sqrt{x} + 5$

The graph is the square root function that is shifted up 5 units. The domain is restricted by the radicand since it has an even root. Since the radicand must be greater than or equal to zero, the domain is $x \geq 0$.

3. $f(x) = -\sqrt{x}$

The graph is the square root function that is reflected over the x -axis. The domain is restricted by the radicand since it has an even root. Since the radicand must be greater than or equal to zero, the domain is $x \geq 0$.

4. $f(x) = \sqrt[3]{x-2}$

The graph is the cube root function that is shifted 2 units to the right. There are no restrictions on the domain since it has an odd root, therefore the domain is all real number.

5. $g(x) = (x-5)^2 - 3$

The graph is the square function that is shifted to the right 5 units and down 3 units. There are no restrictions on the domain, therefore, the domain is all real numbers.

6. $f(x) = -x^2 + 1$

The graph is the square function that is reflected over the x -axis and shifted up 1 unit. There are no restrictions on the domain, therefore, the domain is all real numbers.

7. $g(x) = 2 - \sqrt{x-4}$

The graph is the square root function that is shifted 4 units to the right, reflected over the x -axis, and shifted 2 units up. The domain is restricted by the radicand since it has an even root. Since the radicand must be greater than or equal to zero, the domain is $x \geq 4$.

8. $h(x) = |x+5|$

The graph is the absolute value function that is shifted 5 units to the left. There are no restrictions on the domain, therefore, the domain is all real numbers.

9. $g(x) = \sqrt[3]{x} - 3$

The graph is the cube root function that is shifted 3 units down. There are no restrictions on the domain since it has an odd root, therefore the domain is all real number.

10. $f(x) = |x+2| - 4$

The graph is the absolute value function that is shifted 2 units to the left and 4 units down. There are no restrictions on the domain, therefore, the domain is all real numbers.

11. $h(x) = -|x-3| + 2$

The graph is the absolute value function that is shifted 3 units to the right, reflected over the x -axis, and shifted 2 units up. There are no restrictions on the domain, therefore, the domain is all real numbers.

12. $f(x) = x^3 + 2$

The graph is the cube function that is shifted 2 units up. There are no restrictions on the domain, therefore, the domain is all real numbers.

13. $f(x) = -(x+2)^3 + 4$

The graph is the cube function that is shifted 2 units to the left, reflected over the x -axis, and then shifted 4 units up. There are no restrictions on the domain, therefore, the domain is all real numbers.

14. $h(x) = 3 - \sqrt[3]{x-4}$

The graph is the cube root function that is shifted 4 units to the right, reflected over the x -axis, and then shifted 3 units up. There are no restrictions on the domain since it has an odd root, therefore the domain is all real numbers.

In Problems 15–23 write an equation for a function that has a graph with the given characteristics.

15. The shape of $y = x^3$ shifted 6 units right.

$$y = (x-6)^3$$

16. The shape of $y = \sqrt{x}$ shifted 4 units down.

$$y = \sqrt{x} - 4$$

17. The shape of $y = |x|$ reflected over the x -axis and shifted 2 units up.

$$y = -|x| + 2$$

18. The shape of $y = x^2$ shifted 2 units right and 4 units up.

$$y = (x-2)^2 + 4$$

19. The shape of $y = \sqrt[3]{x}$ reflected over the x -axis and shifted 1 unit up.

$$y = 1 - \sqrt[3]{x}$$

20. The shape of $y = x^2$ reflected over the x -axis and shifted 3 units down.

$$y = -x^2 - 3$$

21. The shape of $y = \sqrt{x}$ shifted 4 units left.

$$y = \sqrt{x+4}$$

22. The shape of $y = x^3$ shifted 6 units right and 2 units down.

$$y = (x-6)^3 - 2$$

23. The shape of $y = |x|$ shifted 6 units right and 5 units up.

$$y = |x-6| + 5$$

Name _____ Date _____ Class _____

Section 2-3 Quadratic Functions

Goal: To describe functions that are quadratic in nature

Quadratic Functions:

Standard form of a quadratic: $f(x) = ax^2 + bx + c$ where a, b, c are real and $a \neq 0$.

Vertex form of a quadratic: $f(x) = a(x - h)^2 + k$ where $a \neq 0$ and (h, k) is the vertex.

Axis of symmetry: $x = h$

Minimum/Maximum value:

If $a > 0$, then the turning point (or vertex) is a minimum point on the graph and the minimum value would be k .

If $a < 0$, then the turning point (or vertex) is a maximum point on the graph and the maximum value would be k .

For 1–8 find:

- a. the domain
 - b. the vertex
 - c. the axis of symmetry
 - d. the x -intercept(s)
 - e. the y -intercept
 - f. the maximum or minimum value of the function
- then:
- g. Graph the function.
 - h. State the range.
 - i. State the interval over which the function is decreasing.
 - j. State the interval over which the function is increasing.

1. $f(x) = (x-1)^2 - 3$

- a. The function is a quadratic, therefore the domain is all real numbers.
- b. The function is in vertex form, therefore the vertex is $(1, -3)$.
- c. The axis of symmetry is the x -value of the vertex, therefore the axis of symmetry is $x = 1$.
- d. The x -intercepts are found by setting $f(x) = 0$.

$$f(x) = (x-1)^2 - 3$$

$$0 = x^2 - 2x + 1 - 3$$

$$0 = x^2 - 2x - 2$$

Solve using the quadratic equation

$$x = 1 \pm \sqrt{3}$$

Therefore, the x -intercepts are $(1 + \sqrt{3}, 0)$ and $(1 - \sqrt{3}, 0)$.

- e. The y -intercepts are found by setting $x = 0$.

$$f(x) = (x-1)^2 - 3$$

$$f(0) = (0-1)^2 - 3$$

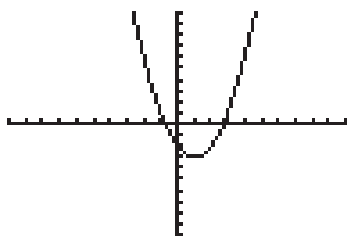
$$f(0) = (-1)^2 - 3$$

$$f(0) = -2$$

Therefore, the y -intercept is $(0, -2)$.

- f. The graph opens upward, therefore the graph has a minimum value which is the y -coordinate of the vertex or -3 .

g.



- h. The graph has a minimum value of -3 , therefore the range is $y \geq -3$.
- i. Based on the graph, the function is decreasing over the interval $(-\infty, 1)$.
- j. Based on the graph, the function is increasing over the interval $(1, \infty)$.

2. $f(x) = (x-2)^2 + 4$

- a. The function is a quadratic, therefore the domain is all real numbers.
- b. The function is in vertex form, therefore the vertex is $(2, 4)$.
- c. The axis of symmetry is the x -value of the vertex, therefore the axis of symmetry is $x = 2$.
- d. The x -intercepts are found by setting $f(x) = 0$.

$$f(x) = (x-2)^2 + 4$$

$$0 = x^2 - 4x + 4 + 4$$

$$0 = x^2 - 4x + 8$$

Solving the above equation by the quadratic equation will result in complex roots, therefore no x -intercepts are present.

- e. The y -intercepts are found by setting $x = 0$.

$$f(x) = (x-2)^2 + 4$$

$$f(0) = (0-2)^2 + 4$$

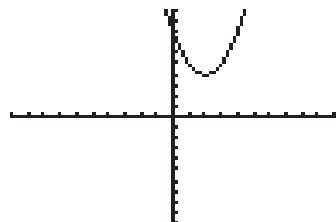
$$f(0) = (-2)^2 + 4$$

$$f(0) = 8$$

Therefore, the y -intercept is $(0, 8)$.

- f. The graph opens upward, therefore the graph has a minimum value which is the y -coordinate of the vertex or 4.

g.



- h. The graph has a minimum value of 4, therefore the range is $y \geq 4$.
- i. Based on the graph, the function is decreasing over the interval $(-\infty, 2)$.
- j. Based on the graph, the function is increasing over the interval $(2, \infty)$.

3. $f(x) = -x^2 + 7$

- a. The function is a quadratic, therefore the domain is all real numbers.
- b. The function in vertex form is $f(x) = -(x - 0)^2 + 7$, therefore the vertex is $(0, 7)$.
- c. The axis of symmetry is the x -value of the vertex, therefore the axis of symmetry is $x = 0$.
- d. The x -intercepts are found by setting $f(x) = 0$.

$$f(x) = -x^2 + 7$$

$$0 = -x^2 + 7$$

Solve using the quadratic equation

$$x = \pm\sqrt{7}$$

Therefore, the x -intercepts are $(\sqrt{7}, 0)$ and $(-\sqrt{7}, 0)$.

- e. The y -intercepts are found by setting $x = 0$.

$$f(x) = -x^2 + 7$$

$$f(0) = -0^2 + 7$$

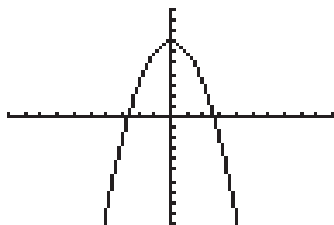
$$f(0) = 0 + 7$$

$$f(0) = 7$$

Therefore, the y -intercept is $(0, 7)$.

- f. The graph opens downward, therefore the graph has a maximum value which is the y -coordinate of the vertex or 7.

g.



- h. The graph has a maximum value of 7, therefore the range is $y \leq 7$.
- i. Based on the graph, the function is decreasing over the interval $(0, \infty)$.
- j. Based on the graph, the function is increasing over the interval $(-\infty, 0)$.

4. $f(x) = -(x-1)^2 - 1$

- a. The function is a quadratic, therefore the domain is all real numbers.
- b. The function is in vertex form, therefore the vertex is $(1, -1)$.
- c. The axis of symmetry is the x -value of the vertex, therefore the axis of symmetry is $x = 1$.
- d. The x -intercepts are found by setting $f(x) = 0$.

$$f(x) = -(x-1)^2 - 1$$

$$0 = -x^2 + 2x - 1 - 1$$

$$0 = -x^2 + 2x - 2$$

Solving the above equation by the quadratic equation will result in complex roots, therefore no x -intercepts are present.

- e. The y -intercepts are found by setting $x = 0$.

$$f(x) = -(x-1)^2 - 1$$

$$f(0) = -(0-1)^2 - 1$$

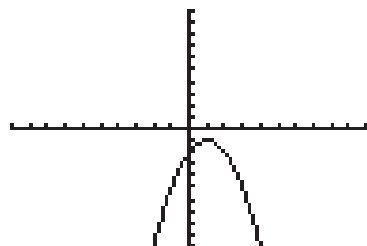
$$f(0) = -(-1)^2 - 1$$

$$f(0) = -2$$

Therefore, the y -intercept is $(0, -2)$.

- f. The graph opens downward, therefore the graph has a maximum value which is the y -coordinate of the vertex or -1 .

g.



- h. The graph has a maximum value of -1 , therefore the range is $y \leq -1$.
- i. Based on the graph, the function is decreasing over the interval $(1, \infty)$.
- j. Based on the graph, the function is increasing over the interval $(-\infty, 1)$.

5. $f(x) = x^2 - 4x$

- a. The function is a quadratic, therefore the domain is all real numbers.
- b. The function in vertex form is $f(x) = (x - 2)^2 - 4$, therefore the vertex is $(2, -4)$.
- c. The axis of symmetry is the x -value of the vertex, therefore the axis of symmetry is $x = 2$.
- d. The x -intercepts are found by setting $f(x) = 0$.

$$f(x) = x^2 - 4x$$

$$0 = x^2 - 4x$$

$$0 = x(x - 4)$$

$$x = 0, 4$$

Therefore, the x -intercepts are $(0, 0)$ and $(4, 0)$.

- e. The y -intercepts are found by setting $x = 0$.

$$f(x) = x^2 - 4x$$

$$f(0) = 0^2 - 4(0)$$

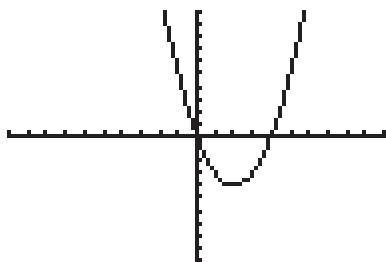
$$f(0) = 0 + 0$$

$$f(0) = 0$$

Therefore, the y -intercept is $(0, 0)$.

- f. The graph opens upward, therefore the graph has a minimum value which is the y -coordinate of the vertex or -4 .

g.



- h. The graph has a minimum value of -4 , therefore the range is $y \geq -4$.
- i. Based on the graph, the function is decreasing over the interval $(-\infty, 2)$.
- j. Based on the graph, the function is increasing over the interval $(2, \infty)$.

6. $f(x) = x^2 + 2x - 4$

- The function is a quadratic, therefore the domain is all real numbers.
- The function in vertex form is $f(x) = (x+1)^2 - 5$, therefore the vertex is $(-1, -5)$.
- The axis of symmetry is the x -value of the vertex, therefore the axis of symmetry is $x = -1$.
- The x -intercepts are found by setting $f(x) = 0$.

$$f(x) = (x+1)^2 - 5$$

$$0 = x^2 + 2x + 1 - 5$$

$$0 = x^2 + 2x - 4$$

Solve using the quadratic equation

$$x = -1 \pm \sqrt{5}$$

Therefore, the x -intercepts are $(-1 + \sqrt{5}, 0)$ and $(-1 - \sqrt{5}, 0)$.

- The y -intercepts are found by setting $x = 0$.

$$f(x) = (x+1)^2 - 5$$

$$f(0) = (0+1)^2 - 5$$

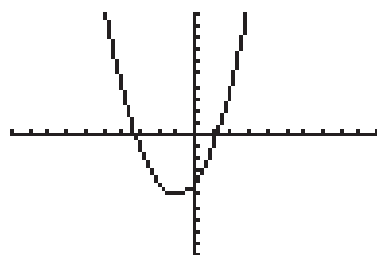
$$f(0) = (1)^2 - 5$$

$$f(0) = -4$$

Therefore, the y -intercept is $(0, -4)$.

- The graph opens upward, therefore the graph has a minimum value which is the y -coordinate of the vertex or -5 .

g.



- The graph has a minimum value of -5 , therefore the range is $y \geq -5$.
- Based on the graph, the function is decreasing over the interval $(-\infty, -1)$.
- Based on the graph, the function is increasing over the interval $(-1, \infty)$.

7. $f(x) = x^2 + 2x + 1$

- a. The function is a quadratic, therefore the domain is all real numbers.
- b. The function in vertex form is $f(x) = (x + 1)^2 + 0$, therefore the vertex is $(-1, 0)$.
- c. The axis of symmetry is the x -value of the vertex, therefore the axis of symmetry is $x = -1$.
- d. The x -intercepts are found by setting $f(x) = 0$.

$$f(x) = x^2 + 2x + 1$$

$$0 = x^2 + 2x + 1$$

$$0 = (x + 1)(x + 1)$$

$$x = -1$$

Therefore, there is only one x -intercept which is $(-1, 0)$.

- e. The y -intercepts are found by setting $x = 0$.

$$f(x) = x^2 + 2x + 1$$

$$f(0) = 0^2 + 2(0) + 1$$

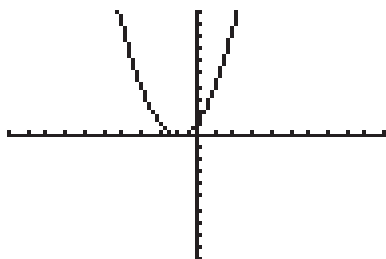
$$f(0) = 0 + 0 + 1$$

$$f(0) = 1$$

Therefore, the y -intercept is $(0, 1)$.

- f. The graph opens upward, therefore the graph has a minimum value which is the y -coordinate of the vertex or 0.

g.



- h. The graph has a minimum value of 0, therefore the range is $y \geq 0$.
- i. Based on the graph, the function is decreasing over the interval $(-\infty, -1)$.
- j. Based on the graph, the function is increasing over the interval $(-1, \infty)$.

8. $f(x) = -x^2 + 10x - 19$

- a. The function is a quadratic, therefore the domain is all real numbers.
- b. The function in vertex form is $f(x) = -(x - 5)^2 + 6$, therefore the vertex is $(5, 6)$.
- c. The axis of symmetry is the x -value of the vertex, therefore the axis of symmetry is $x = 5$.
- d. The x -intercepts are found by setting $f(x) = 0$.

$$f(x) = -x^2 + 10x - 19$$

$$0 = -x^2 + 10x - 19$$

$$0 = x^2 - 10x + 19$$

Solve using the quadratic equation

$$x = 5 \pm \sqrt{6}$$

Therefore, the x -intercepts are $(5 + \sqrt{6}, 0)$ and $(5 - \sqrt{6}, 0)$.

- e. The y -intercepts are found by setting $x = 0$.

$$f(x) = -x^2 + 10x - 19$$

$$f(0) = -0^2 + 10(0) - 19$$

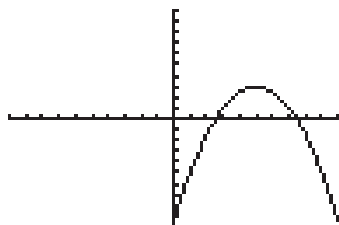
$$f(0) = 0 + 0 - 19$$

$$f(0) = -19$$

Therefore, the y -intercept is $(0, -19)$.

- f. The graph opens downward, therefore the graph has a maximum value which is the y -coordinate of the vertex or 6.

g.



- h. The graph has a maximum value of 6, therefore the range is $y \leq 6$.
- i. Based on the graph, the function is decreasing over the interval $(5, \infty)$.
- j. Based on the graph, the function is increasing over the interval $(-\infty, 5)$.

9. The revenue and cost functions for a company that manufactures components for washing machines were determined to be:

$$R(x) = x(200 - 4x) \quad \text{and} \quad C(x) = 160 + 20x$$

where x is the number of components in millions and $R(x)$ and $C(x)$ are in millions of dollars.

a) How many components must be sold in order for the company to break even? (Break-even points are when $R(x) = C(x)$.) (Round answers to nearest million.)

$$\begin{aligned} R(x) &= C(x) \\ x(200 - 4x) &= 160 + 20x \\ 200x - 4x^2 &= 160 + 20x \\ 0 &= 4x^2 - 180x + 160 \\ \text{Solve the equation by the quadratic equation} \\ x &\approx 0.9, 44.09 \end{aligned}$$

The company would need to sell approximately 1 million or 44 million to break even.

b) Find the profit equation. ($P(x) = R(x) - C(x)$)

$$\begin{aligned} P(x) &= R(x) - C(x) \\ P(x) &= x(200 - 4x) - (160 + 20x) \\ P(x) &= 200x - 4x^2 - 160 - 20x \\ P(x) &= -4x^2 + 180x - 160 \end{aligned}$$

c) Determine the maximum profit. How many components must be sold in order to achieve that maximum profit?

The maximum profit occurs at the vertex of the profit function. The x -coordinate is $x = -\frac{b}{2a} = -\frac{180}{2(-4)} = \frac{-180}{-8} = 22.5$. To find the y -coordinate of the vertex, substitute the value into the function as follows:

$$\begin{aligned} P(x) &= -4x^2 + 180x - 160 \\ P(22.5) &= -4(22.5)^2 + 180(22.5) - 160 \\ P(22.5) &= -2025 + 4050 - 160 \\ P(22.5) &= 1865 \end{aligned}$$

The maximum profit of \$1,865 million is achieved when 22.5 million components are sold.

10. A company keeps records of the total revenue (money taken in) in thousands of dollars from the sale of x units (in thousands) of a product. It determines that total revenue is a function $R(x)$ given by

$$R(x) = 300x - x^2$$

It also keeps records of the total cost of producing x units of the same product. It determines that the total cost is a function $C(x)$ given by

$$C(x) = 40x + 1600$$

a) Find the break-even points for this company. (Round answer to nearest 1000.)

$$R(x) = C(x)$$

$$300x - x^2 = 40x + 1600$$

$$0 = x^2 - 260x + 1600$$

Solve the equation by the quadratic equation

$$x \approx 6,307, 253.693$$

The company would need to sell approximately 6,000 or 254,000 to break even.

b) Determine at what point profit is at a maximum. What is the maximum profit? How many units must be sold in order to achieve maximum profit?

The profit equation is:

$$P(x) = R(x) - C(x)$$

$$P(x) = 300x - x^2 - (40x + 1600)$$

$$P(x) = -x^2 + 260x - 1600$$

The maximum profit occurs at the vertex of the profit function. The x -coordinate is $x = -\frac{b}{2a} = -\frac{260}{2(-1)} = \frac{-260}{-2} = 130$. To find the y -coordinate of the vertex, substitute the value into the function as follows:

$$P(x) = -x^2 + 260x - 1600$$

$$P(130) = -(130)^2 + 260(130) - 1600$$

$$P(130) = -16,900 + 33,800 - 1600$$

$$P(130) = 15,300$$

The maximum profit of \$15,300 thousands or \$15,300,000 is achieved when 130,000 units are sold.

11. The cost, $C(x)$, of building a house is a function of the number of square feet, x , in the house. If the cost function can be approximated by

$$C(x) = 0.01x^2 - 20x + 25,000 \quad \text{where } 1000 \leq x \leq 3500$$

a) What would be the cost of building a 1500 square foot house?

Substitute the value of 1500 into the cost function:

$$\begin{aligned} C(x) &= 0.01x^2 - 20x + 25,000 \\ C(1500) &= 0.01(1500)^2 - 20(1500) + 25,000 \\ C(1500) &= 0.01(2,250,000) - 30,000 + 25,000 \\ C(1500) &= 17,500 \end{aligned}$$

It will cost \$17,500 to build a 1500 square foot house.

b) Find the minimum cost to build a house. How many square feet would that house have?

The minimum cost occurs at the vertex of the cost function. The x -coordinate is $x = -\frac{b}{2a} = -\frac{-20}{2(0.01)} = \frac{20}{0.02} = 1000$. To find the y -coordinate of the vertex, substitute the value into the function as follows:

$$\begin{aligned} C(x) &= 0.01x^2 - 20x + 25000 \\ C(1000) &= 0.01(1000)^2 - 20(1000) + 25,000 \\ C(1000) &= 10,000 - 20,000 + 25,000 \\ C(1000) &= 15,000 \end{aligned}$$

The minimum cost of \$15,000 is achieved when a 1000 square foot home is built.

12. The cost of producing computer software is a function of the number of hours worked by the employees. If the cost function can be approximated by

$$C(x) = 0.04x^2 - 20x + 6000 \quad \text{where } 200 \leq x \leq 1000$$

a) What would be the cost if the employees worked 800 hours?

Substitute the value of 800 into the cost function:

$$C(x) = 0.04x^2 - 20x + 6000$$

$$C(800) = 0.04(800)^2 - 20(800) + 6000$$

$$C(800) = 0.04(640,000) - 16,000 + 6000$$

$$C(800) = 15,600$$

If the employees work 800 hours, it will cost \$15,600 to produce the software.

b) Find the number of hours the employees should work in order to minimize the cost. What would the minimum cost be?

The minimum cost occurs at the vertex of the cost function. The x -coordinate is $x = -\frac{b}{2a} = -\frac{-20}{2(0.04)} = \frac{20}{0.08} = 250$. To find the y -coordinate of the vertex, substitute the value into the function as follows:

$$C(x) = 0.04x^2 - 20x + 6000$$

$$C(250) = 0.04(250)^2 - 20(250) + 6000$$

$$C(250) = 2500 - 5000 + 6000$$

$$C(250) = 3500$$

The minimum cost of \$3500 is achieved when the employees work 250 hours.

Name _____ Date _____ Class _____

Section 2-4 Polynomial and Rational Functions

Goal: To describe and identify functions that are polynomial and rational in nature

Definition: Polynomial function

$f(x) = a_n x^n + a_{n-1} x^{n-1} + \dots + a_1 x + a_0$ for n a nonnegative integer, called the degree of the polynomial. The coefficients a_0, a_1, \dots, a_n are real numbers with $a_n \neq 0$. The domain of a polynomial function is the set of all real numbers.

Definition: Rational function

$f(x) = \frac{n(x)}{d(x)}$ $d(x) \neq 0$ where $n(x)$ and $d(x)$ are polynomials. The domain is the set of all real numbers such that $d(x) \neq 0$.

Vertical Asymptotes:

Case 1: Suppose $n(x)$ and $d(x)$ have no real zero in common. If c is a real number such that $d(c) = 0$, then the line $x = c$ is a vertical asymptote of the graph.

Case 2: If $n(x)$ and $d(x)$ have one or more real zeros in common, cancel common linear factors and apply Case 1 to the reduced fraction.

Horizontal Asymptotes:

Case 1: If $\text{degree } n(x) < \text{degree } d(x)$, then $y = 0$ is the horizontal asymptote.

Case 2: If $\text{degree } n(x) = \text{degree } d(x)$, then $y = a/b$ is the horizontal asymptote, where a is the leading coefficient of $n(x)$ and b is the leading coefficient of $d(x)$.

Case 3: If $\text{degree } n(x) > \text{degree } d(x)$, there is no horizontal asymptote.

For 1–6 determine each of the following for the polynomial functions:

- the degree of the polynomial
- the x -intercept(s) of the graph of the polynomial
- the y -intercept of the graph of the polynomial

1. $f(x) = x^3 - 7x - 6 = (x + 2)(x - 3)(x + 1)$

- The degree of the polynomial is the highest exponent, which is 3.
- The x -intercept(s) are found by setting the polynomial equal to zero. The polynomial is already in factored form, therefore if we set the factors equal to zero, the zeros of the polynomial occur at -1 , -2 , and 3 .
- The y -intercept occurs when the x value is zero. If the x value is zero, the only term that will not be zero is the constant term, therefore the y -intercept is $(0, -6)$.

2. $f(x) = x^3 + 4x^2 - 4x - 16 = (x - 2)(x + 2)(x + 4)$

- The degree of the polynomial is the highest exponent, which is 3.
- The x -intercept(s) are found by setting the polynomial equal to zero. The polynomial is already in factored form, therefore if we set the factors equal to zero, the zeros of the polynomial occur at 2 , -2 , and -4 .
- The y -intercept occurs when the x value is zero. If the x value is zero, the only term that will not be zero is the constant term, therefore the y -intercept is $(0, -16)$.

3. $f(x) = x^3 - 3x^2 - 10x + 24 = (x + 3)(x - 2)(x - 4)$

- The degree of the polynomial is the highest exponent, which is 3.
- The x -intercept(s) are found by setting the polynomial equal to zero. The polynomial is already in factored form, therefore if we set the factors equal to zero, the zeros of the polynomial occur at -3 , 2 , and 4 .
- The y -intercept occurs when the x value is zero. If the x value is zero, the only term that will not be zero is the constant term, therefore the y -intercept is $(0, 24)$.

4. $f(x) = x^3 + 4x^2 - x - 4 = (x + 4)(x + 1)(x - 1)$

- The degree of the polynomial is the highest exponent, which is 3.
- The x -intercept(s) are found by setting the polynomial equal to zero. The polynomial is already in factored form, therefore if we set the factors equal to zero, the zeros of the polynomial occur at -4 , -1 , and 1 .
- The y -intercept occurs when the x value is zero. If the x value is zero, the only term that will not be zero is the constant term, therefore the y -intercept is $(0, -4)$.

5. $f(x) = x^4 - 2x^3 + x^2 + 2x - 2 = (x - 1)(x + 1)(x^2 - 2x + 2)$

- The degree of the polynomial is the highest exponent, which is 4.
- The x -intercept(s) are found by setting the polynomial equal to zero. The polynomial is already in factored form. The third factor must be solved using the quadratic equation, therefore, the zeros of the polynomial occur at 1 , -1 , and $1 \pm \sqrt{3}$.
- The y -intercept occurs when the x value is zero. If the x value is zero, the only term that will not be zero is the constant term, therefore the y -intercept is $(0, -2)$.

6. $f(x) = x^5 + 5x^4 - 20x^2 - x + 15 = (x + 3)(x - 1)(x + 1)(x^2 + 2x - 5)$

- The degree of the polynomial is the highest exponent, which is 5.
- The x -intercept(s) are found by setting the polynomial equal to zero. The polynomial is already in factored form. The fourth factor must be solved using the quadratic equation, therefore, the zeros of the polynomial occur at -3 , -1 , 1 , and $-1 \pm \sqrt{6}$.
- The y -intercept occurs when the x value is zero. If the x value is zero, the only term that will not be zero is the constant term, therefore the y -intercept is $(0, -15)$.

For the given rational functions in 7–12:

- Find the domain.
- Find any x -intercept(s).
- Find any y -intercept.
- Find any vertical asymptote.
- Find any horizontal asymptote.
- Sketch a graph of $y = f(x)$ for $-10 \leq x \leq 10$.

7. $f(x) = \frac{1}{2x}$

a. The function is defined everywhere except when the denominator is zero. The domain is therefore all real numbers except 0.

b. The x -intercept(s) are found by setting the function equal to 0. Since the function is a rational expression and the numerator cannot be zero, the function value cannot be zero. Therefore, there is no x -intercept.

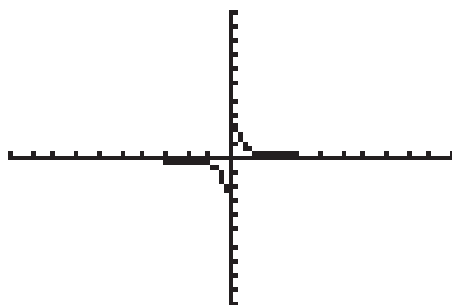
c. The y -intercept is found when the value of x is zero. Since $x = 0$ is not in the domain, there is no y -intercept.

d. Vertical asymptotes occur at values where the function is not defined. Since the function is not defined for $x = 0$, the vertical asymptote is the line $x = 0$.

e. Horizontal asymptotes are found by dividing all terms by the highest power of x . Therefore, $f(x) = \frac{1}{2x} = \frac{\frac{1}{2x}}{\frac{2x}{2x}} = \frac{\frac{1}{2x}}{1}$, as x increases or decreases without bound, the

denominator is always 1 and the numerator tends to 0; so $f(x)$ tends to 0. The horizontal asymptote is the line $y = 0$.

f.



8. $f(x) = \frac{3x}{x-5}$

- a. The function is defined everywhere except when the denominator is zero.

$$x - 5 = 0$$

$$x = 5$$

The domain is therefore all real numbers except 5.

- b. The x -intercept(s) are found by setting the function equal to 0. Since the function is a rational expression, the function value is zero when the numerator is zero.

$$3x = 0$$

$$x = 0$$

Therefore, the x -intercept is $(0, 0)$.

- c. The y -intercept is found when the value of x is zero.

$$f(x) = \frac{3x}{x-5}$$

$$f(0) = \frac{3(0)}{0-5}$$

$$f(0) = \frac{0}{-5} = 0$$

Therefore, the y -intercept is $(0, 0)$.

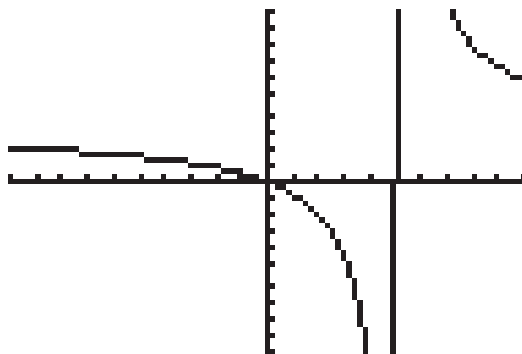
- d. Vertical asymptotes occur at values where the function is not defined. Since the function is not defined for $x = 5$, the vertical asymptote is the line $x = 5$.

- e. Horizontal asymptotes are found by dividing all terms by the highest power of

x. Therefore, $f(x) = \frac{3x}{x-5} = \frac{\frac{3x}{x}}{\frac{x}{x} - \frac{5}{x}} = \frac{3}{1 - \frac{5}{x}}$, as x increases or decreases without bound, the

numerator is always 3 and the denominator tends to $1 - 0$, or 1; so $f(x)$ tends to 3. The horizontal asymptote is the line $y = 3$.

- f.



9. $f(x) = \frac{3x}{x-3}$

- a. The function is defined everywhere except when the denominator is zero.

$$x - 3 = 0$$

$$x = 3$$

The domain is therefore all real numbers except 3.

- b. The x -intercept(s) are found by setting the function equal to 0. Since the function is a rational expression, the function value is zero when the numerator is zero.

$$3x = 0$$

$$x = 0$$

Therefore, the x -intercept is $(0, 0)$.

- c. The y -intercept is found when the value of x is zero.

$$f(x) = \frac{3x}{x-3}$$

$$f(0) = \frac{3(0)}{0-3}$$

$$f(0) = \frac{0}{-3} = 0$$

Therefore, the y -intercept is $(0, 0)$.

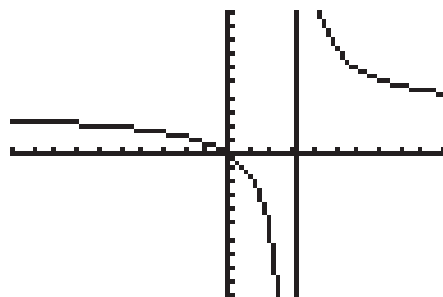
- d. Vertical asymptotes occur at values where the function is not defined. Since the function is not defined for $x = 3$, the vertical asymptote is the line $x = 3$.

- e. Horizontal asymptotes are found by dividing all terms by the highest power of

x . Therefore, $f(x) = \frac{3x}{x-3} = \frac{\frac{3x}{x}}{\frac{x}{x} - \frac{3}{x}} = \frac{3}{1 - \frac{3}{x}}$, as x increases or decreases without bound, the

numerator is always 3 and the denominator tends to $1 - 0$, or 1; so $f(x)$ tends to 3. The horizontal asymptote is the line $y = 3$.

- f.



10. $f(x) = \frac{2x-4}{x+3}$

- a. The function is defined everywhere except when the denominator is zero.

$$x+3=0$$

$$x=-3$$

The domain is therefore all real numbers except -3 .

- b. The x -intercept(s) are found by setting the function equal to 0. Since the function is a rational expression, the function value is zero when the numerator is zero.

$$2x-4=0$$

$$2x=4$$

$$x=2$$

Therefore, the x -intercept is $(2, 0)$.

- c. The y -intercept is found when the value of x is zero.

$$f(x) = \frac{2x-4}{x+3}$$

$$f(0) = \frac{2(0)-4}{0+3}$$

$$f(0) = \frac{-4}{3}$$

Therefore, the y -intercept is $(0, -\frac{4}{3})$.

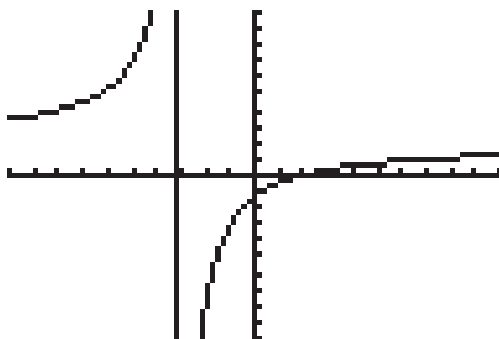
- d. Vertical asymptotes occur at values where the function is not defined. Since the function is not defined for $x = -3$, the vertical asymptote is the line $x = -3$.

- e. Horizontal asymptotes are found by dividing all terms by the highest power of

x. Therefore, $f(x) = \frac{2x-4}{x+3} = \frac{\frac{2x}{x} - \frac{4}{x}}{\frac{x}{x} + \frac{3}{x}} = \frac{2 - \frac{4}{x}}{1 + \frac{3}{x}}$, as x increases or decreases without bound, the

numerator tends to $2 - 0$, or 2 and the denominator tends to $1 - 0$, or 1; so $f(x)$ tends to 2. The horizontal asymptote is the line $y = 2$.

- f.



11. $f(x) = \frac{4+x}{4-x}$

- a. The function is defined everywhere except when the denominator is zero.

$$4 - x = 0$$

$$4 = x$$

The domain is therefore all real numbers except 4.

- b. The x -intercept(s) are found by setting the function equal to 0. Since the function is a rational expression, the function value is zero when the numerator is zero.

$$4 + x = 0$$

$$x = -4$$

Therefore, the x -intercept is $(-4, 0)$.

- c. The y -intercept is found when the value of x is zero.

$$f(x) = \frac{4+x}{4-x}$$

$$f(0) = \frac{4+0}{4-0}$$

$$f(0) = \frac{4}{4} = 1$$

Therefore, the y -intercept is $(0, 1)$.

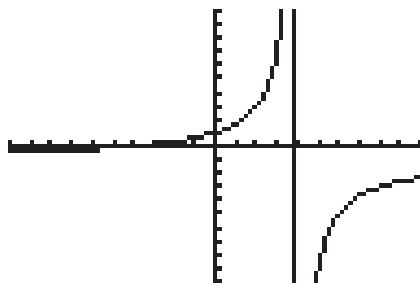
- d. Vertical asymptotes occur at values where the function is not defined. Since the function is not defined for $x = 4$, the vertical asymptote is the line $x = 4$.

- e. Horizontal asymptotes are found by dividing all terms by the highest power of x . Therefore, $f(x) = \frac{4+x}{4-x} = \frac{\frac{4}{x} + \frac{x}{x}}{\frac{4}{x} - \frac{x}{x}} = \frac{\frac{4}{x} + 1}{\frac{4}{x} - 1}$, as x increases or decreases without bound, the

numerator tends to $0 + 1$, or 1 and the denominator tends to $0 - 1$, or -1 ; so $f(x)$ tends to -1 .

The horizontal asymptote is the line $y = -1$.

- f.



12. $f(x) = \frac{1-5x}{1+2x}$

- a. The function is defined everywhere except when the denominator is zero.

$$1 + 2x = 0$$

$$2x = -1$$

$$x = -\frac{1}{2}$$

The domain is therefore all real numbers except $-\frac{1}{2}$.

- b. The x -intercept(s) are found by setting the function equal to 0. Since the function is a rational expression, when the numerator is zero, the function value is zero.

$$1 - 5x = 0$$

$$-5x = -1$$

$$x = \frac{1}{5}$$

Therefore, the x -intercept is $(\frac{1}{5}, 0)$.

- c. The y -intercept is found when the value of x is zero.

$$f(x) = \frac{1-5x}{1+2x}$$

$$f(0) = \frac{1-5(0)}{1+2(0)}$$

$$f(0) = \frac{1}{1} = 1$$

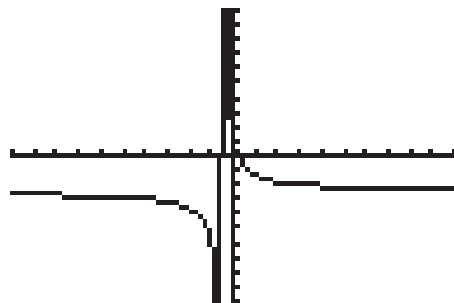
Therefore, the y -intercept is $(0, 1)$.

- d. Vertical asymptotes occur at values where the function is not defined. Since the function is not defined for $x = -\frac{1}{2}$, the vertical asymptote is the line $x = -\frac{1}{2}$.

- e. Horizontal asymptotes are found by dividing all terms by the highest power of

x . Therefore, $f(x) = \frac{1-5x}{1+2x} = \frac{\frac{1}{x} - \frac{5x}{x}}{\frac{1}{x} + \frac{2x}{x}} = \frac{\frac{1}{x} - 5}{\frac{1}{x} + 2}$, as x increases or decreases without bound, the numerator tends to $0 - 5$, or -5 and the denominator tends to $0 + 2$, or 2 ; so $f(x)$ tends to $-\frac{5}{2}$. The horizontal asymptote is the line $y = -\frac{5}{2}$.

f.



13. A video production company is planning to produce a documentary. The producer estimates that it will cost \$52,000 to produce the video and \$20 per video to copy and distribute the tape.

a) Assuming that the total cost to market the video, $C(n)$, is linearly related to the total number, n , of videos produced, write an equation for the cost function.

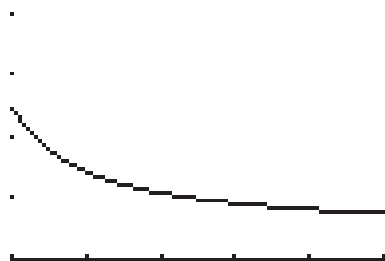
$$C(n) = 20n + 52,000$$

b) The average cost per video for an output of n videos is given by $\bar{C}(n) = \frac{C(n)}{n}$.

Find the average cost function. $\bar{C}(n) = \frac{C(n)}{n} = \frac{20n + 52,000}{n}$

c) Sketch a graph of the average cost function for $500 \leq n \leq 3000$.

The x -axis scale shown is from 500 to 3000. Each tick mark is 500 units. The y -axis scale shown is from 0 to 200. Each tick mark is 50 units.



d) What does the average cost per video tend to as production increases?

To find the value that the function tends to go towards, you will find the horizontal asymptote of the function. Horizontal asymptotes are found by dividing all terms by the

highest power of n . Therefore, $\bar{C}(n) = \frac{\frac{20n}{n} + \frac{52,000}{n}}{\frac{n}{n}} = \frac{20 + \frac{52,000}{n}}{1}$, as n increases without

bound, the numerator tends to $20 + 0$, or 20 and the denominator is always 1; so $\bar{C}(n)$ tends to 20. This means that the average cost per video tends towards \$20 each.

14. A contractor purchases a piece of equipment for \$36,000. The equipment requires an average expenditure of \$8.25 per hour for fuel and maintenance, and the operator is paid \$13.50 per hour to operate the machinery.

a) Assuming that the total cost per day, $C(h)$, is linearly related to the number of hours, h , that the machine is operated, write an equation for the cost function.

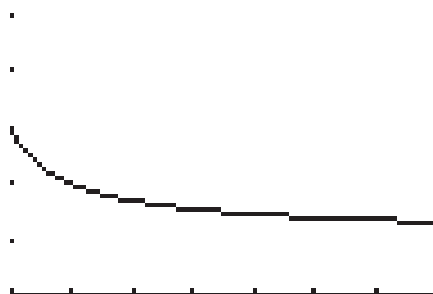
$$C(h) = 21.75h + 36,000$$

b) The average cost per hour of operating the machine is given by $\bar{C}(h) = \frac{C(h)}{h}$.

Find the average cost function. $\bar{C}(h) = \frac{C(h)}{h} = \frac{21.75h + 36,000}{h}$

c) Sketch a graph of the average cost function for $1000 \leq h \leq 8000$.

The x -axis scale shown is from 1000 to 8000. Each tick mark is 1000 units. The y -axis scale shown is from 0 to 100. Each tick mark is 20 units.



d) What cost per hour does the average cost per hour tend to as the number of hours of use increases?

To find the value that the function tends to go towards, you will find the horizontal asymptote of the function. Horizontal asymptotes are found by dividing all terms by the highest power of h . Therefore, $\bar{C}(h) = \frac{21.75h + \frac{36,000}{h}}{\frac{h}{h}} = \frac{21.75 + \frac{36,000}{h}}{1}$, as h increases without bound, the numerator tends to $21.75 + 0$, or 21.75 and the denominator is always 1; so $\bar{C}(h)$ tends to 21.75. This means that the average cost per hour tends towards \$21.75 as the number of hours of use increases.

15. The daily cost function for producing x printers for home computers was determined to be:

$$C(x) = x^2 + 8x + 6000$$

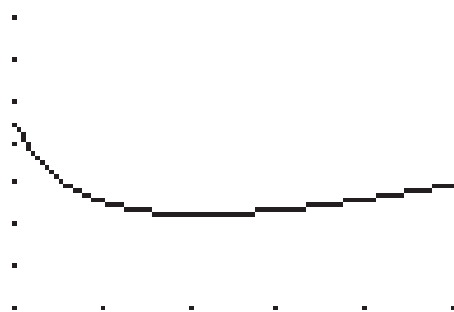
The average cost per printer at a production level of x printers per day is $\bar{C}(x) = \frac{C(x)}{x}$.

- a) Find the average cost function.

$$\bar{C}(x) = \frac{C(x)}{x} = \frac{x^2 + 8x + 6000}{x}$$

- b) Sketch a graph of the average cost function for $25 \leq x \leq 150$.

The x -axis scale shown is from 25 to 150. Each tick mark is 25 units. The y -axis scale shown is from 50 to 400. Each tick mark is 50 units.



- c) At what production level is the daily average cost at a minimum? What is that minimum value?

Based on the graph above, the minimum value occurs around the third tick mark, which has a value of 75. By substituting values into the average value equation, we would have the following:

$$\bar{C}(75) = 163$$

$$\bar{C}(76) = 162.947$$

$$\bar{C}(77) = 162.922$$

$$\bar{C}(78) = 162.923$$

$$\bar{C}(79) = 162.949$$

Therefore, the minimum average cost of 162.92 occurs when 77 printers are produced.

16. The monthly cost function for producing x brake assemblies for a certain type of car is given by:

$$C(x) = 3x^2 + 36x + 9000$$

The average cost per brake assembly at a production level of x assemblies per month is

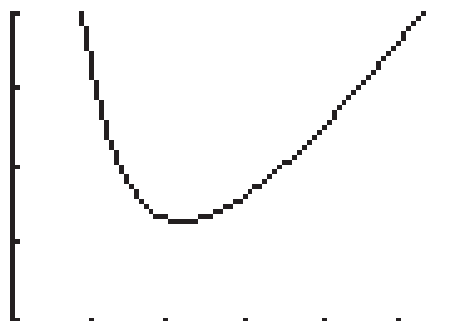
$$\bar{C}(x) = \frac{C(x)}{x}.$$

- a) Find the average cost function.

$$\bar{C}(x) = \frac{C(x)}{x} = \frac{3x^2 + 36x + 9000}{x}$$

- b) Sketch a graph of the average cost function for $0 \leq x \leq 150$.

The x -axis scale shown is from 0 to 150. Each tick mark is 25 units. The y -axis scale shown is from 300 to 500. Each tick mark is 50 units.



- c) At what production level is the daily average cost at a minimum? What is that minimum value?

Based on the graph above, the minimum value occurs just beyond the third tick mark, which has a value of 50. By substituting values into the average value equation, we would have the following:

$$\bar{C}(53) = 364.811$$

$$\bar{C}(54) = 364.667$$

$$\bar{C}(55) = 364.636$$

$$\bar{C}(56) = 364.714$$

Therefore, the minimum average cost of 364.63 occurs when 55 brake assemblies are produced.

Name _____ Date _____ Class _____

Section 2-5 Exponential Functions

Goal: To describe and solve functions that are exponential in nature

Rules for Exponents:

$$a^m \cdot a^n = a^{m+n} \quad \text{Product Rule} \qquad a^0 = 1, \ a \neq 0 \quad \text{Zero Exponent Rule}$$

$$\frac{a^m}{a^n} = a^{m-n} \quad \text{Quotient Rule} \qquad (a^m)^n = a^{mn} \quad \text{Power Rule}$$

In problems 1–8, describe in words the transformations that can be used to obtain the graph of $g(x)$ from the graph of $f(x)$.

1. $g(x) = 4^{x+3} - 4$; $f(x) = 4^x$

The function f is shifted 3 units to the left and 4 units down.

2. $g(x) = -3^x - 5$; $f(x) = 3^x$

The function f is reflected over the x -axis and shifted 5 units down.

3. $g(x) = 2^{x-4} - 6$; $f(x) = 2^x$

The function f is shifted 4 units to the right and 6 units down.

4. $g(x) = -5^{x-3} + 2$; $f(x) = 5^x$

The function f is shifted 3 units to the right, reflected over the x -axis, and shifted 2 units up.

5. $g(x) = 10^{x-2} - 5$; $f(x) = 10^x$

The function f is shifted 2 units to the right and 5 units down.

6. $g(x) = -10^x - 3$; $f(x) = 10^x$

The function f is reflected over the x -axis and shifted 3 units down.

7. $g(x) = e^{x+1} + 2$; $f(x) = e^x$

The function f is shifted 1 unit to the left and 2 units up.

8. $g(x) = -e^x + 5$; $f(x) = e^x$

The function f is reflected over the x -axis and shifted 5 units up.

In Problems 9–20, solve each equation for x .

9. $10^{2x-3} = 10^{5x+4}$

10. $10^{x^2} = 10^{2x+8}$

11. $6^{5x-4} = 6^{x^2}$

$2x - 3 = 5x + 4$

$x^2 = 2x + 8$

$5x - 4 = x^2$

$-7 = 3x$

$x^2 - 2x - 8 = 0$

$x^2 - 5x + 4 = 0$

$-\frac{7}{3} = x$

$(x - 4)(x + 2) = 0$

$(x - 4)(x - 1) = 0$

$x = -2, 4$

$x = 1, 4$

12. $8^{x^2} = 8^{8x}$

13. $(x + 6)^3 = (3x - 8)^3$

14. $(2x - 7)^5 = (x + 1)^5$

$x^2 = 8x$

$x + 6 = 3x - 8$

$2x - 7 = x + 1$

$x^2 - 8x = 0$

$14 = 2x$

$x = 8$

$x(x - 8) = 0$

$7 = x$

$x = 0, 8$

15. $(e^3)^4 = e^x$

16. $(e^x)^4 = e^{x^2}$

17. $(e^{2x})^x = e^{15+x}$

$3(4) = x$

$4x = x^2$

$2x^2 = 15 + x$

$12 = x$

$x^2 - 4x = 0$

$2x^2 - x - 15 = 0$

$x(x - 4) = 0$

$(2x + 5)(x - 3) = 0$

$x = 0, 4$

$x = -\frac{5}{2}, 3$

18. $3^x \cdot 3^4 = 3^{3x^2}$

19. $2^{x^2} = 2^{12x} \cdot 2^{-32}$

20. $9^x \cdot 9 = 9^{2x^2}$

$x + 4 = 3x^2$

$x^2 = 12x - 32$

$x + 1 = 2x^2$

$3x^2 - x - 4 = 0$

$x^2 - 12x + 32 = 0$

$2x^2 - x - 1 = 0$

$(3x - 4)(x + 1) = 0$

$(x - 4)(x - 8) = 0$

$(2x + 1)(x - 1) = 0$

$x = \frac{4}{3}, -1$

$x = 4, 8$

$x = -\frac{1}{2}, 1$

INTEREST FORMULAS

Simple Interest:

$A = P(1 + rt)$

Compound Interest:

$A = P \left(1 + \frac{r}{m} \right)^{mt}$

Continuous Compound Interest:

$A = Pe^{rt}$

where P is the amount invested (principal), r (expressed as a decimal) is the annual interest rate, t is time invested (in years), m is the number of times a year the interest is compounded, and A is the amount of money in the account after t years (future value).

(Round answers for 21–28 to the nearest dollar)

21. Fred inherited \$35,000 from his uncle. He decides to invest his money for 5 years in order to have the greatest down-payment when he buys a house. He can choose from 3 different banks.

Bank A offers 1% compounded monthly.

Bank B offers .5% compounded continuously.

Bank C offers .75% compounded daily.

Which bank offers the best plan so Fred can earn the most money from his investment?

Bank A: $A = P \left(1 + \frac{r}{m} \right)^{mt}$

$$A = 35,000 \left(1 + \frac{0.01}{12} \right)^{12(5)}$$

$$A = 35000(1.000833)^{60}$$

$$A \approx \$36,794$$

Bank B: $A = Pe^{rt}$

$$A = 35,000e^{(0.005)(5)}$$

$$A = 35,000e^{0.025}$$

$$A \approx \$35,886$$

Bank C: $A = P \left(1 + \frac{r}{m} \right)^{mt}$

$$A = 35,000 \left(1 + \frac{0.0075}{365} \right)^{365(5)}$$

$$A = 35,000(1.000021)^{1825}$$

$$A \approx \$36,337$$

Therefore, Bank A is the best option.

22. The day your first child is born you invest \$10,000 in an account that pays 1.2% interest compounded quarterly. How much will be in the account when the child is 18 years old and ready to start to college?

$$A = P \left(1 + \frac{r}{m} \right)^{mt}$$

$$A = 10,000 \left(1 + \frac{0.012}{4} \right)^{4(18)}$$

$$A = 10,000(1.003)^{72}$$

$$A \approx \$12,407$$

23. When your second child is born, you are able to invest only \$5000 but the account pays 1% interest compounded daily. How much will be in the account when this child is 18 years old and ready to start to college?

$$\begin{aligned}A &= P\left(1 + \frac{r}{m}\right)^{mt} \\A &= 5000\left(1 + \frac{0.01}{365}\right)^{365(18)} \\A &= 5000(1.000027)^{6570} \\A &\approx \$5986\end{aligned}$$

24. When your third child comes along, money is even tighter and you are able to invest only \$1000, but you are able to find a bank that will let you invest the money at 1.75% compounded continuously. How much will be in the account when this third child is 18 years old and ready to start to college?

$$\begin{aligned}A &= Pe^{rt} \\A &= 1000e^{(0.0175)(18)} \\A &= 1000e^{0.315} \\A &\approx \$1370\end{aligned}$$

25. Joe Vader plans to start his own business in ten years. How much money would he need to invest today in order to have \$25,000 in ten years if Joe's bank offers a 10-year CD that pays 1.8% interest compounded monthly.

$$\begin{aligned}A &= P\left(1 + \frac{r}{m}\right)^{mt} \\25,000 &= P\left(1 + \frac{0.018}{12}\right)^{12(10)} \\25,000 &= P(1.0015)^{120} \\P &\approx \$20,885\end{aligned}$$

26. Bill and Sue plan to buy a home in 5 years. How much would they need to invest today at 1.2% compounded daily in order to have \$30,000 in five years?

$$\begin{aligned}A &= P \left(1 + \frac{r}{m} \right)^{mt} \\30,000 &= P \left(1 + \frac{0.012}{365} \right)^{365(5)} \\30,000 &= P(1.000088)^{1825} \\P &\approx \$28,253\end{aligned}$$

27. Suppose you invest \$3000 in a four-year certificate of deposit (CD) that pays 1.5% interest compounded monthly the first 3 years and 2.2% compounded daily the last year. What is the value of the CD at the end of the four years?

$$\begin{aligned}A &= P \left(1 + \frac{r}{m} \right)^{mt} \left(1 + \frac{r}{m} \right)^{mt} \\A &= 3000 \left(1 + \frac{0.015}{12} \right)^{12(3)} \left(1 + \frac{0.022}{365} \right)^{365(1)} \\A &= 3000(1.00125)^{36} (1.000060)^{365} \\A &\approx \$3208\end{aligned}$$

28. Suppose you invest \$8000 in a 10-year certificate of deposit (CD) that pays 1.25% interest compounded daily the first 6 years and 2% compounded continuously the last four years. What is the value of the CD at the end of the 10 years?

$$\begin{aligned}A &= P \left(1 + \frac{r}{m} \right)^{mt} e^{rt} \\A &= 8000 \left(1 + \frac{0.0125}{365} \right)^{365(6)} e^{(0.02)(4)} \\A &= 8000(1.000034)^{2190} e^{0.08} \\A &\approx \$9341\end{aligned}$$

Name _____ Date _____ Class _____

Section 2-6 Logarithmic Functions

Goal: To solve problems that are logarithmic in nature

Properties of Logarithms

$$\log_a x + \log_a y = \log_a xy$$

$$\log_a x - \log_a y = \log_a \frac{x}{y}$$

$$\log_a x^n = n \log_a x$$

Exponential Function: $f(x) = a^x$, $a > 0$, $a \neq 1$

$$y = \log_a x \quad \text{means} \quad x = a^y$$

In Problems 1–20 find the value of x . (Evaluate to four decimal places if necessary.)

1. $\log_3 x = 4$

$$x = 3^4$$

$$x = 81$$

2. $\log_3(x+1) = 2$

$$x+1 = 3^2$$

$$x+1 = 9$$

$$x = 8$$

3. $\log_3 3^8 = 7 + 3x$

$$3^{7+3x} = 3^8$$

$$7 + 3x = 8$$

$$3x = 1$$

$$x = \frac{1}{3}$$

4. $\log_2 2^6 = 4 - 3x$

$$2^{4-3x} = 2^6$$

$$4 - 3x = 6$$

$$-3x = 2$$

$$x = -\frac{2}{3}$$

5. $\ln(x+6) = 2$

$$e^2 = x+6$$

$$e^2 - 6 = x$$

$$1.3891 \approx x$$

6. $\log_x(2x+3) = 2$

$$x^2 = 2x+3$$

$$x^2 - 2x - 3 = 0$$

$$(x-3)(x+1) = 0$$

$$x = 3$$

$$x \neq -1$$

The log function cannot have a negative base.

7. $\log_2(7x-19) = \log_2(2x+9)$

$$7x-19 = 2x+9$$

$$5x = 28$$

$$x = 5.6$$

8. $\log_3(8-5x) = \log_3(2x-13)$

$$8-5x = 2x-13$$

$$21 = 7x$$

$$3 = x$$

Since the value of 3 creates a negative log, there is no solution.

9. $\ln x + \ln 3 = 3$

$$\ln 3x = 3$$

$$e^3 = 3x$$

$$\frac{e^3}{3} = x$$

$$6.6952 \approx x$$

10. $\ln x - \ln 3 = 1$

$$\ln \frac{x}{3} = 1$$

$$e^1 = \frac{x}{3}$$

$$3e = x$$

$$8.1548 \approx x$$

11. $\log(x-1) - \log 4 = 3$

$$\log \frac{x-1}{4} = 3$$

$$10^3 = \frac{x-1}{4}$$

$$(4)10^3 = x-1$$

$$4(1000)+1 = x$$

$$4001 = x$$

12. $\ln(x-1) - \ln 6 = 2$

$$\ln \frac{x-1}{6} = 2$$

$$e^2 = \frac{x-1}{6}$$

$$6e^2 = x-1$$

$$6e^2 + 1 = x$$

$$45.3343 \approx x$$

13. $2^{3x} = 12$

$$\log 2^{3x} = \log 12$$

$$3x \log 2 = \log 12$$

$$x = \frac{\log 12}{3 \log 2}$$

$$x \approx 1.1950$$

14. $5^{x-1} = 17$

$$\log 5^{x-1} = \log 17$$

$$(x-1) \log 5 = \log 17$$

$$x \log 5 - \log 5 = \log 17$$

$$x \log 5 = \log 17 + \log 5$$

$$x = \frac{\log 17 + \log 5}{\log 5}$$

$$x \approx 2.7604$$

15. $7^{x-1} = 8^x$

$$\log 7^{x-1} = \log 8^x$$

$$(x-1) \log 7 = x \log 8$$

$$x \log 7 - \log 7 = x \log 8$$

$$x \log 7 - x \log 8 = \log 7$$

$$x(\log 7 - \log 8) = \log 7$$

$$x = \frac{\log 7}{\log 7 - \log 8}$$

$$x \approx -14.5727$$

16. $4^{2x+3} = 5^{x-2}$

$$\log 4^{2x+3} = \log 5^{x-2}$$

$$(2x+3) \log 4 = (x-2) \log 5$$

$$2x \log 4 + 3 \log 4 = x \log 5 - 2 \log 5$$

$$2x \log 4 - x \log 5 = -2 \log 5 - 3 \log 4$$

$$x(2 \log 4 - \log 5) = -2 \log 5 - 3 \log 4$$

$$x = \frac{-2 \log 5 - 3 \log 4}{2 \log 4 - \log 5}$$

$$x \approx -6.3429$$

17. $7^{x+1} = 10^{2x}$

$$\log 7^{x+1} = \log 10^{2x}$$

$$(x+1) \log 7 = 2x \log 10$$

$$x \log 7 + \log 7 = 2x \log 10$$

$$x \log 7 - 2x \log 10 = -\log 7$$

$$x(\log 7 - 2 \log 10) = -\log 7$$

$$x = \frac{-\log 7}{\log 7 - 2 \log 10}$$

$$x \approx 0.7317$$

18. $e^{x+4} = 14.654$

$$\ln e^{x+4} = \ln(14.654)$$

$$x+4 = \ln(14.654)$$

$$x = \ln(14.654) - 4$$

$$x \approx -1.3153$$

19. $x+5 = e^3$

$$x = e^3 - 5$$

$$x \approx 15.0855$$

20. $e^{4x} = e^{20}$

$$4x = 20$$

$$x = 5$$

21. You want to accumulate \$20,000 by your son's eighteenth birthday. How much do you need to invest on the day he is born in an account that will pay 1.4% interest compounded quarterly? (Round your answer to the nearest dollar.)

$$\begin{aligned}A &= P\left(1 + \frac{r}{m}\right)^{mt} \\20,000 &= P\left(1 + \frac{0.014}{4}\right)^{4(18)} \\20,000 &= P(1.0035)^{72} \\\$15,552 &\approx P\end{aligned}$$

22. Using the information in Problem 21, how much would you need to invest if you waited until he is 10 years old to start the fund?

$$\begin{aligned}A &= P\left(1 + \frac{r}{m}\right)^{mt} \\20,000 &= P\left(1 + \frac{0.014}{4}\right)^{4(8)} \\20,000 &= P(1.0035)^{32} \\\$17,884 &\approx P\end{aligned}$$

23. A bond that sells for \$1000 today can be redeemed for \$1200 in 10 years. If interest is compounded quarterly, what is the annual interest rate for this investment? (Round your answer to two decimal places when written as a percentage.)

$$\begin{aligned}A &= P\left(1 + \frac{r}{m}\right)^{mt} \\1200 &= 1000\left(1 + \frac{r}{4}\right)^{4(10)} \\1.2 &= \left(1 + \frac{r}{4}\right)^{40} \\1.2^{1/40} &= 1 + \frac{r}{4} \\1.2^{1/40} - 1 &= \frac{r}{4} \\4(1.2^{1/40} - 1) &= r \\1.83\% &\approx r\end{aligned}$$

24. A bond that sells for \$18,000 today can be redeemed for \$20,000 in 6 years. If interest is compounded monthly, what is the annual interest rate for this investment? (Round your answer to two decimal places when written as a percentage.)

$$A = P \left(1 + \frac{r}{m} \right)^{mt}$$

$$20,000 = 18,000 \left(1 + \frac{r}{12} \right)^{12(6)}$$

$$1.111 = \left(1 + \frac{r}{12} \right)^{72}$$

$$1.111^{1/72} = 1 + \frac{r}{12}$$

$$1.111^{1/72} - 1 = \frac{r}{12}$$

$$12(1.111^{1/72} - 1) = r$$

$$1.76\% \approx r$$

25. What is the minimum number of months required for an investment of \$10,000 to grow to at least \$20,000 (double in value) if the investment earns 1.8% annual interest rate compounded monthly? What would be the actual value of the investment after that many months?

$$A = P \left(1 + \frac{r}{m} \right)^{mt}$$

$$20,000 = 10,000 \left(1 + \frac{0.018}{12} \right)^{12t}$$

$$2 = (1.0015)^{12t}$$

$$\ln 2 = \ln (1.0015)^{12t}$$

$$\ln 2 = 12t \ln(1.0015)$$

$$\frac{\ln 2}{12 \ln 1.0015} = t$$

$$38.5 \approx t$$

It will take about $(38.5)(12) = 462$ months to double.

$$A = P \left(1 + \frac{r}{m} \right)^{mt}$$

$$A = 10,000 \left(1 + \frac{0.018}{12} \right)^{12(38.5)}$$

$$A = 10,000(1.0015)^{462}$$

$$A = 10,000(1.998668)$$

$$A \approx \$19,987$$

26. What is the minimum number of months required for an investment of \$10,000 to grow to at least \$30,000 (triple in value) if the investment earns 1.8% annual interest rate compounded monthly? What would be the actual value of the investment after that many months?

$$A = P \left(1 + \frac{r}{m} \right)^{mt}$$

$$30,000 = 10,000 \left(1 + \frac{0.018}{12} \right)^{12t}$$

$$3 = (1.0015)^{12t}$$

$$\ln 3 = \ln (1.0015)^{12t}$$

$$\ln 3 = 12t \ln(1.0015)$$

$$\frac{\ln 3}{12 \ln 1.0015} = t$$

$$61.1 \approx t$$

It will take about $(61.1)(12) = 733$ months to triple.

$$A = P \left(1 + \frac{r}{m} \right)^{mt}$$

$$A = 10,000 \left(1 + \frac{0.018}{12} \right)^{12(61.1)}$$

$$A = 10,000(1.0015)^{733}$$

$$A = 10,000(3.000192)$$

$$A \approx \$30,002$$

27. Some years ago Ms. Martinez invested \$7000 at 2% compounded quarterly. The account now contains \$10,000. How long ago did she start the account? (Round your answer UP to the next year.)

$$\begin{aligned}A &= P\left(1 + \frac{r}{m}\right)^{mt} \\10,000 &= 7000\left(1 + \frac{0.02}{4}\right)^{4t} \\ \frac{10}{7} &= (1.005)^{4t} \\ \ln \frac{10}{7} &= \ln (1.005)^{4t} \\ \ln \frac{10}{7} &= 4t \ln(1.005) \\ \frac{\ln \frac{10}{7}}{4 \ln 1.005} &= t \\ 17.88 &\approx t\end{aligned}$$

It took approximately 18 years to have a balance of \$10,000.

28. Some years ago Mr. Tang invested \$18,000 at 3% compounded monthly. The account now contains \$24,000. How long ago did he start the account? (Round your answer UP to the next year.)

$$\begin{aligned}A &= P\left(1 + \frac{r}{m}\right)^{mt} \\24,000 &= 18,000\left(1 + \frac{0.03}{12}\right)^{12t} \\ \frac{4}{3} &= (1.0025)^{12t} \\ \ln \frac{4}{3} &= \ln (1.0025)^{12t} \\ \ln \frac{4}{3} &= 12t \ln(1.0025) \\ \frac{\ln \frac{4}{3}}{12 \ln 1.0025} &= t \\ 9.60 &\approx t\end{aligned}$$

It took approximately 10 years to have a balance of \$24,000.

29. In a certain country the number of people above the poverty level is currently 25 million and growing at a rate of 4% annually. Assuming that the population is growing continuously, the population, P (in millions), t years from now, is determined by the formula:

$$P = 25e^{0.04t}$$

In how many years will there be 30 million people above the poverty level? 40 million? (Round your answers to nearest tenth of a year.)

30 million people

40 million people

$$P = 25e^{0.04t}$$

$$P = 25e^{0.04t}$$

$$30 = 25e^{0.04t}$$

$$40 = 25e^{0.04t}$$

$$1.2 = e^{0.04t}$$

$$1.6 = e^{0.04t}$$

$$\ln 1.2 = \ln e^{0.04t}$$

$$\ln 1.6 = \ln e^{0.04t}$$

$$\ln 1.2 = 0.04t$$

$$\ln 1.6 = 0.04t$$

$$\frac{\ln 1.2}{0.04} = t$$

$$\frac{\ln 1.6}{0.04} = t$$

$$4.6 \approx t$$

$$11.8 \approx t$$

It will take approximately 4.6 years to reach 30 million people and 11.8 years to reach 40 million people.

30. The number of bacteria present in a culture at time t is given by the formula

$N = 20e^{0.35t}$, where t is in hours. How many bacteria are present initially (that is when $t = 0$)? How many are present after 24 hours? How many hours does it take for the bacteria population to double? (Round your answers to nearest whole number.)

Initially there are $N = 20e^{0.35(0)} = 20e^0 = 20$ bacteria present.

After 24 hours there will be $N = 20e^{0.35(24)} = 20e^{8.4} = 20(4447.066748) = 88,941$ bacteria present.

$$N = 20e^{0.35t}$$

$$40 = 20e^{0.35t}$$

$$2 = e^{0.35t}$$

$$\ln 2 = \ln e^{0.35t}$$

$$\ln 2 = 0.35t$$

$$\frac{\ln 2}{0.35} = t$$

$$1.98 \approx t$$

The number of bacteria will double after approximately 2 hours.